

Please check the examination details below before entering your candidate information

Candidate surname					Other names				
Centre Number					Candidate Number				
<input type="text"/>	<input type="text"/>	<input type="text"/>	<input type="text"/>	<input type="text"/>	<input type="text"/>	<input type="text"/>	<input type="text"/>	<input type="text"/>	<input type="text"/>

Pearson Edexcel International Advanced Level

Monday 16 October 2023

Morning (Time: 1 hour 30 minutes) **Paper reference** **WME01/01**

Mathematics

International Advanced Subsidiary/Advanced Level

Mechanics M1

You must have:
Mathematical Formulae and Statistical Tables (Yellow), calculator

Total Marks

Candidates may use any calculator permitted by Pearson regulations. Calculators must not have the facility for symbolic algebra manipulation, differentiation and integration, or have retrievable mathematical formulae stored in them.

Instructions

- Use **black** ink or ball-point pen.
- If pencil is used for diagrams/sketches/graphs it must be dark (HB or B).
- **Fill in the boxes** at the top of this page with your name, centre number and candidate number.
- Answer **all** questions and ensure that your answers to parts of questions are clearly labelled.
- Answer the questions in the spaces provided
– *there may be more space than you need.*
- You should show sufficient working to make your methods clear.
Answers without working may not gain full credit.
- Whenever a numerical value of g is required, take $g = 9.8 \text{ m s}^{-2}$, and give your answer to either 2 significant figures or 3 significant figures.

Information

- A booklet 'Mathematical Formulae and Statistical Tables' is provided.
- There are 7 questions in this question paper. The total mark for this paper is 75.
- The marks for **each** question are shown in brackets
– *use this as a guide as to how much time to spend on each question.*

Advice

- Read each question carefully before you start to answer it.
- Try to answer every question.
- Check your answers if you have time at the end.
- If you change your mind about an answer, cross it out and put your new answer and any working underneath.

Turn over ►

P74321A

©2023 Pearson Education Ltd.
Z:1/1/1/




Pearson

1.

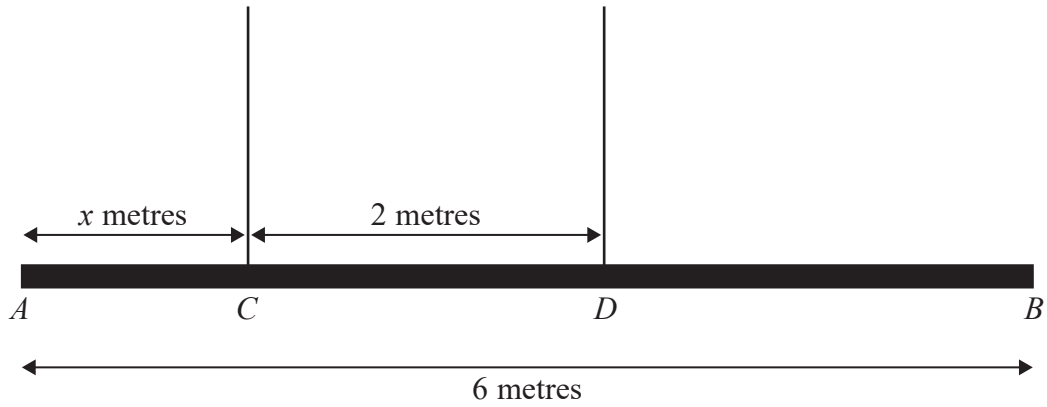


Figure 1

Figure 1 shows a beam AB with weight 24 N and length 6 m .

The beam is suspended by two light vertical ropes. The ropes are attached to the points C and D on the beam where $AC = x$ metres and $CD = 2\text{ m}$.

The tension in the rope attached to the beam at C is double the tension in the rope attached to the beam at D .

The beam is modelled as a uniform rod, resting horizontally in equilibrium.

Find

- (i) the tension in the rope attached to the beam at D .
- (ii) the value of x .

(5)

DO NOT WRITE IN THIS AREA

DO NOT WRITE IN THIS AREA

DO NOT WRITE IN THIS AREA

2



P 7 4 3 2 1 A 0 2 2 8



2.

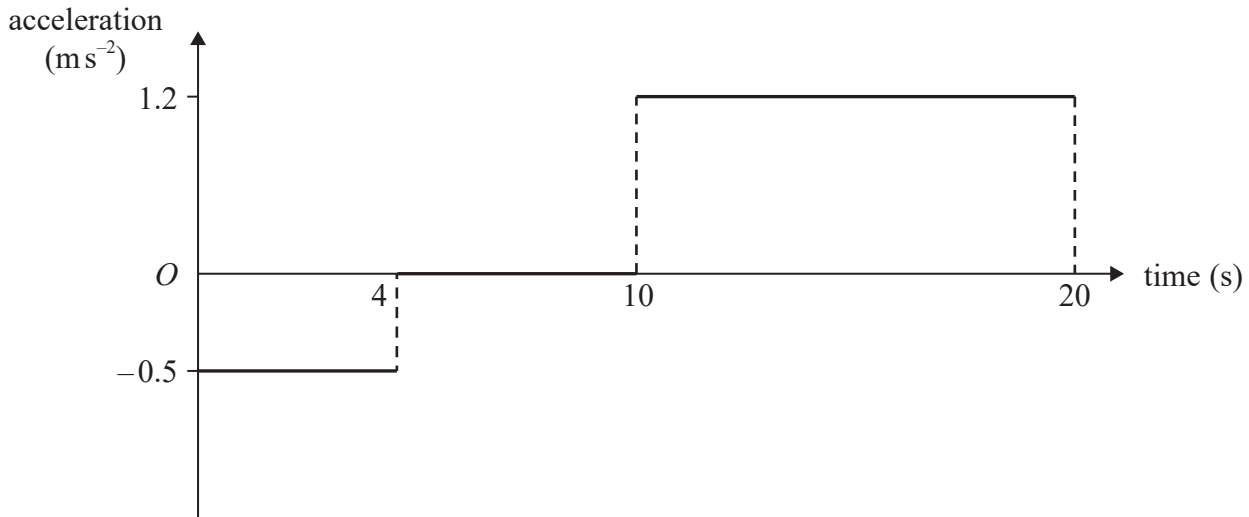


Figure 2

Two fixed points, A and B , are on a straight horizontal road.

The **acceleration-time** graph in Figure 2 represents the motion of a car travelling along the road as it moves from A to B .

At time $t = 0$, the car passes through A with speed 8 m s^{-1}

At time $t = 20 \text{ s}$, the car passes through B with speed $v \text{ m s}^{-1}$

- (a) Show that $v = 18$ (3)
- (b) Sketch a speed-time graph for the motion of the car from A to B . (3)
- (c) Find the distance AB . (4)



3. A hammer is used to hit a tent peg into soft ground.

The hammer has mass 1.8 kg and the tent peg has mass 0.2 kg.

The hammer and tent peg are both modelled as particles and the impact is modelled as a direct collision.

Immediately before the impact, the tent peg is stationary and the hammer is moving vertically downwards with speed 10 m s^{-1}

Immediately after the impact, the hammer and tent peg move together, vertically downwards, with the **same** speed $v \text{ m s}^{-1}$

- (a) Find the value of v (2)
- (b) Find the magnitude of the impulse exerted on the tent peg by the hammer, stating the units of your answer. (3)

The ground exerts a constant vertical resistive force of magnitude R newtons, bringing the hammer and tent peg to rest after they travel a distance of 12 cm.

- (c) Find the value of R . (5)

DO NOT WRITE IN THIS AREA

DO NOT WRITE IN THIS AREA

DO NOT WRITE IN THIS AREA



4. [In this question \mathbf{i} and \mathbf{j} are horizontal unit vectors directed due east and due north respectively.]

A particle P moves with constant acceleration $(-\lambda\mathbf{i} + 2\lambda\mathbf{j})\text{ms}^{-2}$, where λ is a positive constant.

At time $t = 0$, the velocity of P is $(5\mathbf{i} - 8\mathbf{j})\text{ms}^{-1}$

- (a) Find the velocity of P when $t = 5$ s, giving your answer in terms of \mathbf{i} , \mathbf{j} and λ . (2)

The speed of P when $t = 5$ s is 13ms^{-1}

- (b) Show that

$$25\lambda^2 - 42\lambda - 16 = 0 \quad (3)$$

- (c) Find the direction of motion of P when $t = 4$ s, giving your answer as a bearing to the nearest degree. (5)

DO NOT WRITE IN THIS AREA

DO NOT WRITE IN THIS AREA

DO NOT WRITE IN THIS AREA



5.

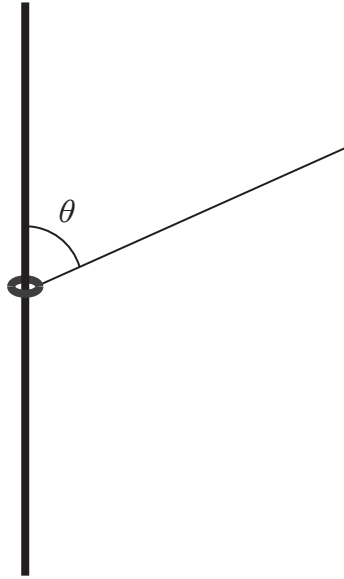


Figure 3

A small ring of mass 0.2 kg is attached to one end of a light inextensible string.

The ring is **threaded** onto a fixed rough vertical rod.

The string is taut and makes an angle θ with the rod, as shown in Figure 3,
where $\tan \theta = \frac{12}{5}$

Given that the ring is in equilibrium and that the tension in the string is 10 N ,

(a) find the magnitude of the frictional force acting on the ring, (3)

(b) state the direction of the frictional force acting on the ring. (1)

The coefficient of friction between the ring and the rod is $\frac{1}{4}$

Given that the ring is in equilibrium, and that the tension in the string, T newtons, can now vary,

(c) (i) find the minimum value of T
(ii) find the maximum value of T (8)

DO NOT WRITE IN THIS AREA

DO NOT WRITE IN THIS AREA

DO NOT WRITE IN THIS AREA



7.

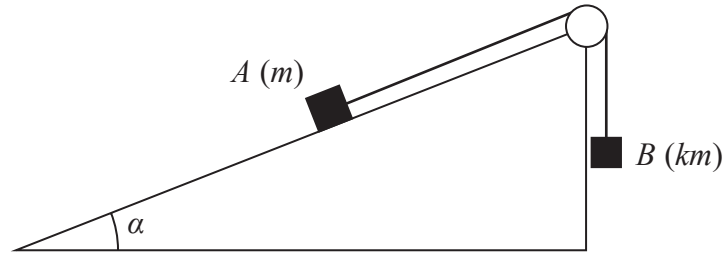


Figure 4

Figure 4 shows a block A of mass m held at rest on a rough plane. The plane is inclined at an angle α to the horizontal and the coefficient of friction between the block and the plane is μ .

One end of a light inextensible string is now attached to A . The string passes over a small smooth pulley which is fixed at the top of the plane.

The other end of the string is attached to a block B of mass km .

Block B hangs vertically below the pulley, with the string taut.

The string from A to the pulley lies along a line of greatest slope of the plane.

Both A and B are modelled as particles.

When the system is released from rest, A moves up the plane and the tension in the string is $\frac{4mg}{3}$

Given that $\mu = \frac{1}{3}$ and $\tan \alpha = \frac{7}{24}$

- (a) (i) find the magnitude of the acceleration of A , giving your answer in terms of g ,
(ii) find the value of k . (9)
- (b) Find the magnitude of the resultant force exerted on the pulley by the string, giving your answer in terms of m and g . (4)

DO NOT WRITE IN THIS AREA

DO NOT WRITE IN THIS AREA

DO NOT WRITE IN THIS AREA



