

Please check the examination details below before entering your candidate information

Candidatesurname					Other names									
Pearson Edexcel International Advanced Level					Centre Number					Candidate Number				
					<input type="text"/>					<input type="text"/>				
Time 1 hour 30 minutes					Paper reference					WMA11/01				
Mathematics														
International Advanced Subsidiary/Advanced Level														
Pure Mathematics P1														
You must have: Mathematical Formulae and Statistical Tables (Yellow), calculator										Total Marks				

Candidates may use any calculator permitted by Pearson regulations. Calculators must not have the facility for symbolic algebra manipulation, differentiation and integration, or have retrievable mathematical formulae stored in them.

Instructions

- Use **black** ink or ball-point pen.
- If pencil is used for diagrams/sketches/graphs it must be dark (HB or B).
- **Fill in the boxes** at the top of this page with your name, centre number and candidate number.
- Answer **all** questions and ensure that your answers to parts of questions are clearly labelled.
- Answer the questions in the spaces provided
– *there may be more space than you need.*
- You should show sufficient working to make your methods clear. Answers without working may not gain full credit.
- Inexact answers should be given to three significant figures unless otherwise stated.

Information

- A booklet 'Mathematical Formulae and Statistical Tables' is provided.
- There are 9 questions in this question paper. The total mark for this paper is 75.
- The marks for **each** question are shown in brackets
– *use this as a guide as to how much time to spend on each question.*

Advice

- Read each question carefully before you start to answer it.
- Try to answer every question.
- Check your answers if you have time at the end.
- If you change your mind about an answer, cross it out and put your new answer and any working underneath.
- Good luck with your examination.

Turn over ►

P65792A

©2021 Pearson Education Ltd.

1/1/1/1/1/



Pearson

Leave
blank

4. Find

$$\int \frac{(3\sqrt{x} + 2)(x - 5)}{4\sqrt{x}} dx$$

writing each term in simplest form.

(6)

DO NOT WRITE IN THIS AREA

DO NOT WRITE IN THIS AREA

DO NOT WRITE IN THIS AREA



Leave
blank

5.

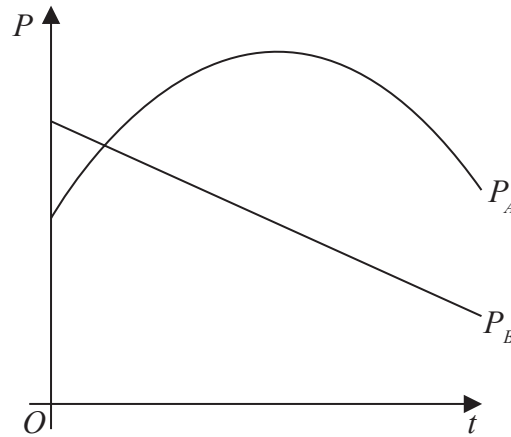


Figure 2

The share value of two companies, company *A* and company *B*, has been monitored over a 15-year period.

The share value P_A of **company A**, in millions of pounds, is modelled by the equation

$$P_A = 53 - 0.4(t - 8)^2 \quad t \geq 0$$

where t is the number of years after monitoring began.

The share value P_B of **company B**, in millions of pounds, is modelled by the equation

$$P_B = -1.6t + 44.2 \quad t \geq 0$$

where t is the number of years after monitoring began.

Figure 2 shows a graph of both models.

Use the equations of one or both models to answer parts (a) to (d).

- (a) Find the difference between the share value of **company A** and the share value of **company B** at the point monitoring began. (2)
- (b) State the maximum share value of **company A** during the 15-year period. (1)
- (c) Find, using algebra and showing your working, the times during this 15-year period when the share value of **company A** was greater than the share value of **company B**. (4)
- (d) Explain why the model for **company A** should not be used to predict its share value when $t = 20$ (1)



Leave
blank

7.

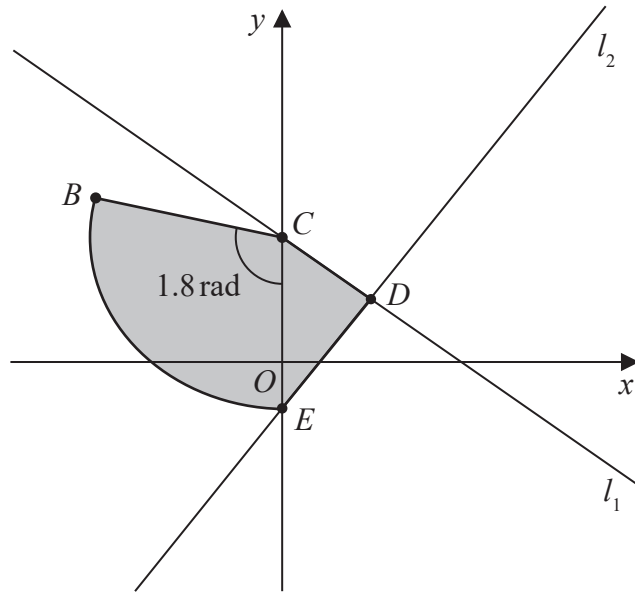


Figure 3

The line l_1 has equation $4y + 3x = 48$

The line l_1 cuts the y -axis at the point C , as shown in Figure 3.

(a) State the y coordinate of C .

(1)

The point $D(8, 6)$ lies on l_1

The line l_2 passes through D and is perpendicular to l_1

The line l_2 cuts the y -axis at the point E as shown in Figure 3.

(b) Show that the y coordinate of E is $-\frac{14}{3}$

(3)

A sector BCE of a circle with centre C is also shown in Figure 3.

Given that angle BCE is 1.8 radians,

(c) find the length of arc BE .

(3)

The region $CBED$, shown shaded in Figure 3, consists of the sector BCE joined to the triangle CDE .

(d) Calculate the exact area of the region $CBED$.

(3)

DO NOT WRITE IN THIS AREA

DO NOT WRITE IN THIS AREA

DO NOT WRITE IN THIS AREA



Leave
blank

Question 7 continued

DO NOT WRITE IN THIS AREA

DO NOT WRITE IN THIS AREA

DO NOT WRITE IN THIS AREA

Q7

--	--

(Total 10 marks)



P 6 5 7 9 2 A 0 2 5 3 2

Leave
blank

9.

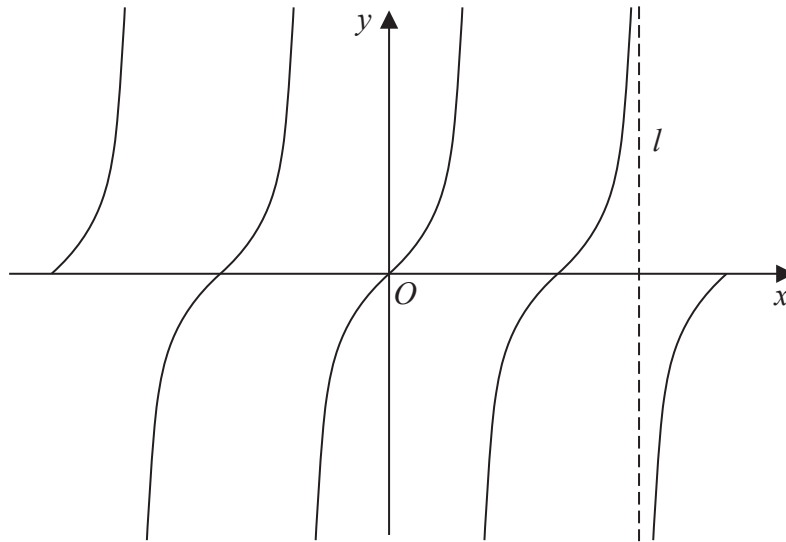


Figure 4

Figure 4 shows a sketch of the curve with equation

$$y = \tan x \quad -2\pi \leq x \leq 2\pi$$

The line l , shown in Figure 4, is an asymptote to $y = \tan x$

(a) State an equation for l .

(1)

A copy of Figure 4, labelled Diagram 1, is shown on the next page.

(b) (i) On Diagram 1, sketch the curve with equation

$$y = \frac{1}{x} + 1 \quad -2\pi \leq x \leq 2\pi$$

stating the equation of the horizontal asymptote of this curve.

(ii) Hence, **giving a reason**, state the number of solutions of the equation

$$\tan x = \frac{1}{x} + 1$$

in the region $-2\pi \leq x \leq 2\pi$

(4)

(c) State the number of solutions of the equation $\tan x = \frac{1}{x} + 1$ in the region

(i) $0 \leq x \leq 40\pi$

(ii) $-10\pi \leq x \leq \frac{5}{2}\pi$

(2)



