

Write your name here

Surname	Other names
---------	-------------

Pearson Edexcel Centre Number Candidate Number

International GCSE

--	--	--	--	--

--	--	--	--	--

Further Pure Mathematics

Paper 1

Friday 12 January 2018 – Morning Time: 2 hours	Paper Reference 4PM0/01
--	-----------------------------------

Calculators may be used.	Total Marks
---------------------------------	-------------

Instructions

- Use black ink or ball-point pen.
- **Fill in the boxes** at the top of this page with your name, centre number and candidate number.
- Answer **all** questions.
- Without sufficient working, correct answers may be awarded no marks.
- Answer the questions in the spaces provided
– *there may be more space than you need.*

Information

- The total mark for this paper is 100.
- The marks for **each** question are shown in brackets
– *use this as a guide as to how much time to spend on each question.*

Advice

- Read each question carefully before you start to answer it.
- Check your answers if you have time at the end.

Turn over ►

P53291A

©2018 Pearson Education Ltd.

1/1/1/



Question 1 continued

DO NOT WRITE IN THIS AREA

DO NOT WRITE IN THIS AREA

DO NOT WRITE IN THIS AREA

Area with horizontal dotted lines for writing answers.

(Total for Question 1 is 8 marks)



2 (a) On the grid opposite, draw

(i) the line with equation $y = 3x - 3$

(ii) the line with equation $3x + 2y = 12$

(2)

(b) Show, by shading, the region R defined by the inequalities

$$y \leq 3x - 3 \quad 3x + 2y \leq 12 \quad y \geq -1$$

(2)

For all points in R with coordinates (x, y)

$$P = 4x - y$$

(c) Find the greatest value of P .

(4)

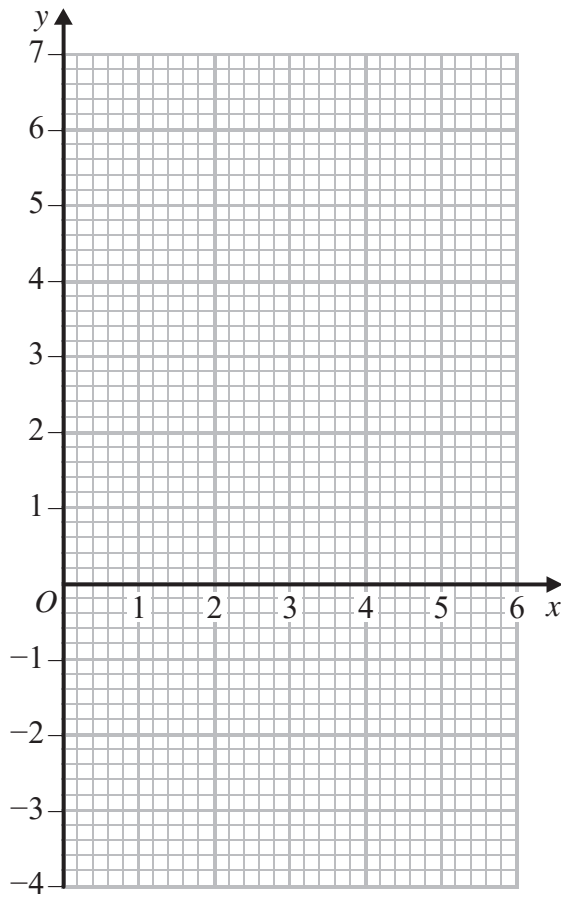
DO NOT WRITE IN THIS AREA

DO NOT WRITE IN THIS AREA

DO NOT WRITE IN THIS AREA



Question 2 continued



DO NOT WRITE IN THIS AREA

DO NOT WRITE IN THIS AREA

DO NOT WRITE IN THIS AREA

.....

.....

.....

.....

.....

.....

.....

.....

.....

.....

.....

.....

.....

.....

.....

.....

.....

.....

.....

.....

.....

.....

Turn over for a spare grid if you need to redraw your graph



Question 2 continued

Area for writing answers, consisting of multiple horizontal dotted lines.

DO NOT WRITE IN THIS AREA

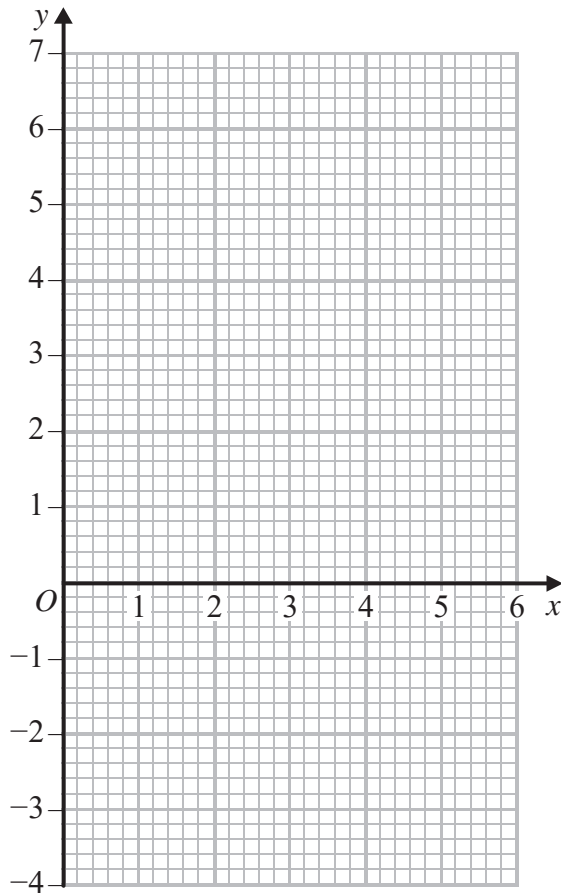
DO NOT WRITE IN THIS AREA

DO NOT WRITE IN THIS AREA



Question 2 continued

Only use this grid if you need to redraw your graph



DO NOT WRITE IN THIS AREA

DO NOT WRITE IN THIS AREA

DO NOT WRITE IN THIS AREA

.....

.....

.....

.....

.....

.....

.....

.....

.....

.....

.....

.....

.....

.....

.....

.....

.....

.....

.....

.....

.....

.....

.....

(Total for Question 2 is 8 marks)



- 3 The volume of a right circular cone is increasing at a constant rate of $27 \text{ cm}^3/\text{s}$. The radius of the base of the cone is always 1.5 times the height of the cone.

Calculate the rate of change of the height of the cone, in cm/s to 3 significant figures, when the height of the cone is 4 cm.

(6)

DO NOT WRITE IN THIS AREA

DO NOT WRITE IN THIS AREA

DO NOT WRITE IN THIS AREA



Question 3 continued

DO NOT WRITE IN THIS AREA

DO NOT WRITE IN THIS AREA

DO NOT WRITE IN THIS AREA

Area with horizontal dotted lines for writing answers.

(Total for Question 3 is 6 marks)



4 A particle P moves along the x -axis. At time t seconds ($t \geq 0$), the displacement of P from the origin is x metres and the velocity, v m/s, of P is given by $v = 2t^2 - 16t + 30$

(a) Find the times at which P is instantaneously at rest.

(2)

(b) Find the acceleration of P at each of these times.

(3)

When $t = 0$, P is at the point where $x = -4$

(c) Find the distance of P from the origin when P first comes to instantaneous rest.

(3)

DO NOT WRITE IN THIS AREA

DO NOT WRITE IN THIS AREA

DO NOT WRITE IN THIS AREA



Question 4 continued

DO NOT WRITE IN THIS AREA

DO NOT WRITE IN THIS AREA

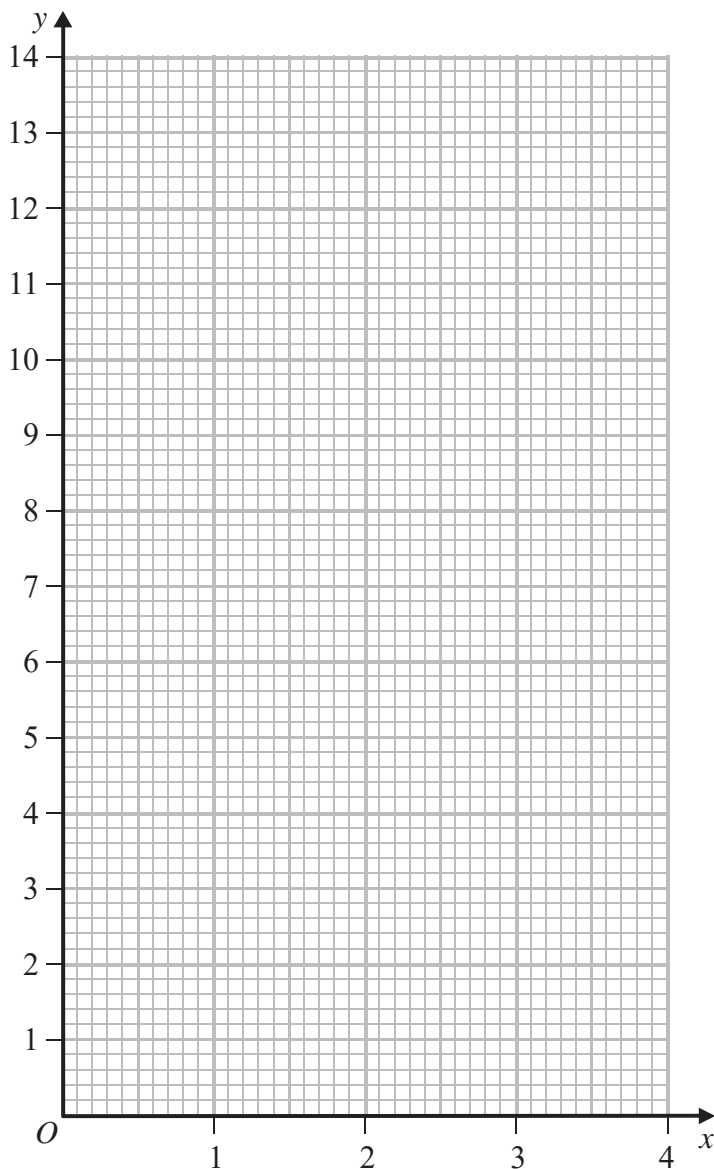
DO NOT WRITE IN THIS AREA

Area with horizontal dotted lines for writing.

(Total for Question 4 is 8 marks)



Question 5 continued



DO NOT WRITE IN THIS AREA

DO NOT WRITE IN THIS AREA

DO NOT WRITE IN THIS AREA

.....

.....

.....

.....

.....

.....

.....

.....

.....

.....

Turn over for a spare grid if you need to redraw your graph



Question 5 continued

Area with horizontal dotted lines for writing.

DO NOT WRITE IN THIS AREA

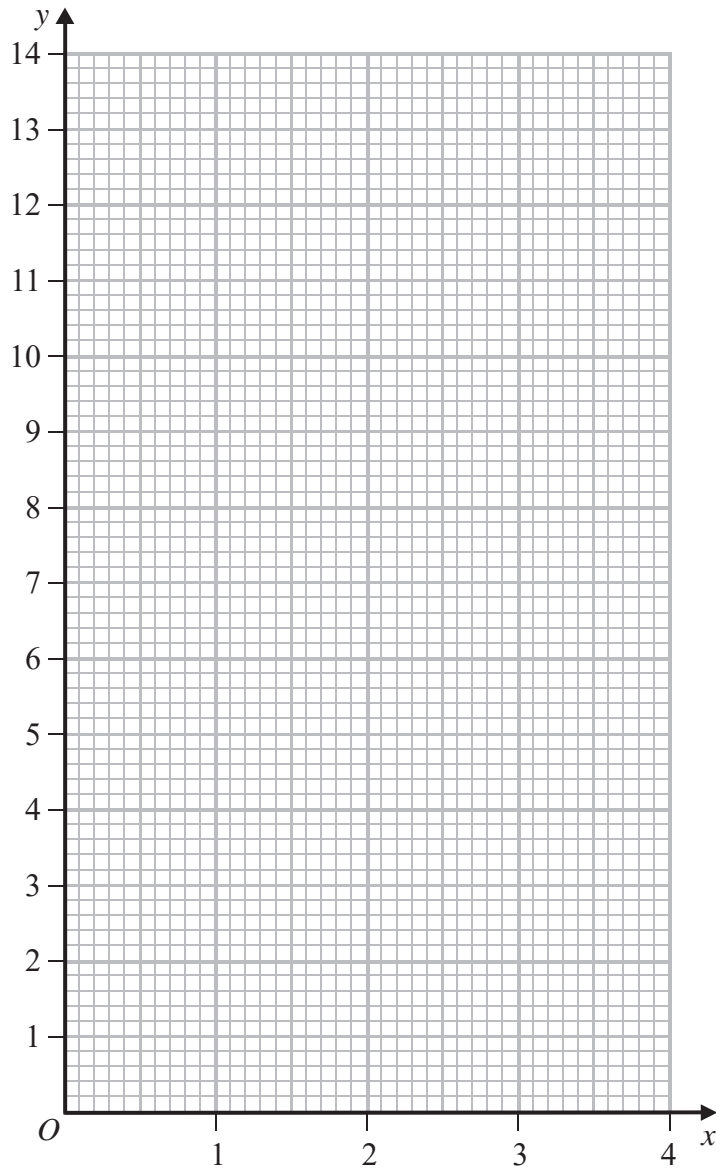
DO NOT WRITE IN THIS AREA

DO NOT WRITE IN THIS AREA



Question 5 continued

Only use this grid if you need to redraw your graph



DO NOT WRITE IN THIS AREA

DO NOT WRITE IN THIS AREA

DO NOT WRITE IN THIS AREA

.....

.....

.....

.....

.....

.....

.....

.....

(Total for Question 5 is 9 marks)



Question 6 continued

DO NOT WRITE IN THIS AREA

DO NOT WRITE IN THIS AREA

DO NOT WRITE IN THIS AREA

Area with horizontal dotted lines for writing.



Question 6 continued

Area with horizontal dotted lines for writing answers.

DO NOT WRITE IN THIS AREA

DO NOT WRITE IN THIS AREA

DO NOT WRITE IN THIS AREA



Question 6 continued

DO NOT WRITE IN THIS AREA

DO NOT WRITE IN THIS AREA

DO NOT WRITE IN THIS AREA

Area with horizontal dotted lines for writing answers.

(Total for Question 6 is 11 marks)



7 (a) Expand $(1 - 4x^2)^{-\frac{1}{2}}$ in ascending powers of x , up to and including the term in x^6 , giving each coefficient as an integer. (3)

(b) Write down the range of values of x for which your expansion is valid. (1)

(c) Expand $\frac{3+x}{\sqrt{1-4x^2}}$ in ascending powers of x up to and including the term in x^4 , giving each coefficient as an integer. (3)

(d) Hence, use algebraic integration to obtain an estimate, to 3 significant figures, of

$$\int_0^{0.3} \frac{3+x}{\sqrt{1-4x^2}} dx \quad (4)$$

DO NOT WRITE IN THIS AREA

DO NOT WRITE IN THIS AREA

DO NOT WRITE IN THIS AREA



Question 7 continued

DO NOT WRITE IN THIS AREA

DO NOT WRITE IN THIS AREA

DO NOT WRITE IN THIS AREA

Area with horizontal dotted lines for writing.



Question 7 continued

DO NOT WRITE IN THIS AREA

DO NOT WRITE IN THIS AREA

DO NOT WRITE IN THIS AREA

Area with horizontal dotted lines for writing answers.

(Total for Question 7 is 11 marks)



8 The sixth term of a geometric series G , with common ratio r ($r \neq 0$), is four times the second term.

(a) Find the two possible exact values of r . (2)

The sum of the third and seventh terms of G is 30

(b) Find the first term of the series. (3)

Given that $r > 0$

(c) find the sum of the first 10 terms of G . (2)

Given that t_n is the n th term of G ,

(d) find the least value of n for which $t_n > 2400$ (3)

DO NOT WRITE IN THIS AREA

DO NOT WRITE IN THIS AREA

DO NOT WRITE IN THIS AREA



Question 8 continued

DO NOT WRITE IN THIS AREA

DO NOT WRITE IN THIS AREA

DO NOT WRITE IN THIS AREA

Area with horizontal dotted lines for writing.



Question 8 continued

DO NOT WRITE IN THIS AREA

DO NOT WRITE IN THIS AREA

DO NOT WRITE IN THIS AREA

Area with horizontal dotted lines for writing.

(Total for Question 8 is 10 marks)



9 It is given that α and β are such that $\alpha + \beta = -\frac{5}{2}$ and $\alpha\beta = -5$

(a) Form a quadratic equation with integer coefficients that has roots α and β (2)

Without solving the equation found in part (a)

(b) find the value of

(i) $\alpha^2 + \beta^2$

(ii) $\alpha^3 + \beta^3$ (5)

(c) Hence form a quadratic equation with integer coefficients that has roots

$\left(\alpha - \frac{1}{\alpha^2}\right)$ and $\left(\beta - \frac{1}{\beta^2}\right)$ (6)

DO NOT WRITE IN THIS AREA

DO NOT WRITE IN THIS AREA

DO NOT WRITE IN THIS AREA



Question 9 continued

DO NOT WRITE IN THIS AREA

DO NOT WRITE IN THIS AREA

DO NOT WRITE IN THIS AREA

Area with horizontal dotted lines for writing.



Question 9 continued

DO NOT WRITE IN THIS AREA

DO NOT WRITE IN THIS AREA

DO NOT WRITE IN THIS AREA

Area with horizontal dotted lines for writing answers.

(Total for Question 9 is 13 marks)



10

$$\cos(A + B) = \cos A \cos B - \sin A \sin B$$

(a) Show that $\cos^2 \theta = \frac{1}{2}(\cos 2\theta + 1)$ (3)

Given that $f(\theta) = 8\cos^4 \theta + 8\sin^2 \theta - 7$

(b) show that $f(\theta) = \cos 4\theta$ (5)

(c) Solve, for $0 \leq \theta \leq \frac{\pi}{2}$, the equation

$$16\cos^4\left(\theta - \frac{\pi}{6}\right) + 16\sin^2\left(\theta - \frac{\pi}{6}\right) - 15 = 0$$
 (4)

(d) Using calculus, find the exact value of

$$\int_0^{\frac{\pi}{2}} (8\cos^4 \theta + 8\sin^2 \theta + 2\sin 2\theta) \, d\theta$$
 (4)

DO NOT WRITE IN THIS AREA

DO NOT WRITE IN THIS AREA

DO NOT WRITE IN THIS AREA



Question 10 continued

DO NOT WRITE IN THIS AREA

DO NOT WRITE IN THIS AREA

DO NOT WRITE IN THIS AREA

Area with horizontal dotted lines for writing.



Question 10 continued

Area with horizontal dotted lines for writing answers.

DO NOT WRITE IN THIS AREA

DO NOT WRITE IN THIS AREA

DO NOT WRITE IN THIS AREA



Question 10 continued

DO NOT WRITE IN THIS AREA

DO NOT WRITE IN THIS AREA

DO NOT WRITE IN THIS AREA

Area with horizontal dotted lines for writing.



