

Please check the examination details below before entering your candidate information


Candidates surname					Other names				
Centre Number					Candidate Number				
<input type="text"/>	<input type="text"/>	<input type="text"/>	<input type="text"/>	<input type="text"/>	<input type="text"/>	<input type="text"/>	<input type="text"/>	<input type="text"/>	<input type="text"/>

**Pearson Edexcel International GCSE**

Time 2 hours

Paper reference **4PM1/02R**

**Further Pure Mathematics**  
**PAPER 2R**



**Calculators may be used.**

Total Marks

### Instructions

- Use **black** ink or ball-point pen.
- **Fill in the boxes** at the top of this page with your name, centre number and candidate number.
- Answer **all** questions.
- Without sufficient working, correct answers may be awarded no marks.
- Answer the questions in the spaces provided  
– *there may be more space than you need.*
- You must **NOT** write anything on the formulae page.  
Anything you write on the formulae page will gain NO credit.

### Information

- The total mark for this paper is 100.
- The marks for **each** question are shown in brackets  
– *use this as a guide as to how much time to spend on each question.*

### Advice

- Read each question carefully before you start to answer it.
- Try to answer every question.
- Check your answers if you have time at the end.

Turn over ►

P71820A

©2023 Pearson Education Ltd.

J:1/1/1/1/1/



  
Pearson

## International GCSE in Further Pure Mathematics Formulae sheet

**Mensuration**Surface area of sphere =  $4\pi r^2$ Curved surface area of cone =  $\pi r \times$  slant heightVolume of sphere =  $\frac{4}{3}\pi r^3$ **Series****Arithmetic series**Sum to  $n$  terms,  $S_n = \frac{n}{2}[2a + (n-1)d]$ **Geometric series**Sum to  $n$  terms,  $S_n = \frac{a(1-r^n)}{(1-r)}$ Sum to infinity,  $S_\infty = \frac{a}{1-r}$   $|r| < 1$ **Binomial series** $(1+x)^n = 1 + nx + \frac{n(n-1)}{2!}x^2 + \dots + \frac{n(n-1)\dots(n-r+1)}{r!}x^r + \dots$  for  $|x| < 1, n \in \mathbb{Q}$ **Calculus****Quotient rule (differentiation)**

$$\frac{d}{dx} \left( \frac{f(x)}{g(x)} \right) = \frac{f'(x)g(x) - f(x)g'(x)}{[g(x)]^2}$$

**Trigonometry****Cosine rule**In triangle  $ABC$ :  $a^2 = b^2 + c^2 - 2bc \cos A$ 

$$\tan \theta = \frac{\sin \theta}{\cos \theta}$$

$$\sin(A+B) = \sin A \cos B + \cos A \sin B$$

$$\sin(A-B) = \sin A \cos B - \cos A \sin B$$

$$\cos(A+B) = \cos A \cos B - \sin A \sin B$$

$$\cos(A-B) = \cos A \cos B + \sin A \sin B$$

$$\tan(A+B) = \frac{\tan A + \tan B}{1 - \tan A \tan B}$$

$$\tan(A-B) = \frac{\tan A - \tan B}{1 + \tan A \tan B}$$

**Logarithms**

$$\log_a x = \frac{\log_b x}{\log_b a}$$

DO NOT WRITE IN THIS AREA

DO NOT WRITE IN THIS AREA

DO NOT WRITE IN THIS AREA





2 Find the set of values of  $x$  for which

(a)  $3x - 8 < 5x + 3$

(1)

(b)  $4x^2 - 7x + 1 > 6 - 2x^2$

(4)

(c) **both**  $3x - 8 < 5x + 3$  **and**  $4x^2 - 7x + 1 > 6 - 2x^2$

(1)

DO NOT WRITE IN THIS AREA

DO NOT WRITE IN THIS AREA

DO NOT WRITE IN THIS AREA



**Question 2 continued**

DO NOT WRITE IN THIS AREA

DO NOT WRITE IN THIS AREA

DO NOT WRITE IN THIS AREA

Area with horizontal dotted lines for writing.

**(Total for Question 2 is 6 marks)**



3 Given that  $y = e^{3x} \sin 2x$

show that  $13y + \frac{d^2y}{dx^2} = 6 \frac{dy}{dx}$

(8)

DO NOT WRITE IN THIS AREA

DO NOT WRITE IN THIS AREA

DO NOT WRITE IN THIS AREA



**Question 3 continued**

DO NOT WRITE IN THIS AREA

DO NOT WRITE IN THIS AREA

DO NOT WRITE IN THIS AREA

Area with horizontal dotted lines for writing.

**(Total for Question 3 is 8 marks)**



4

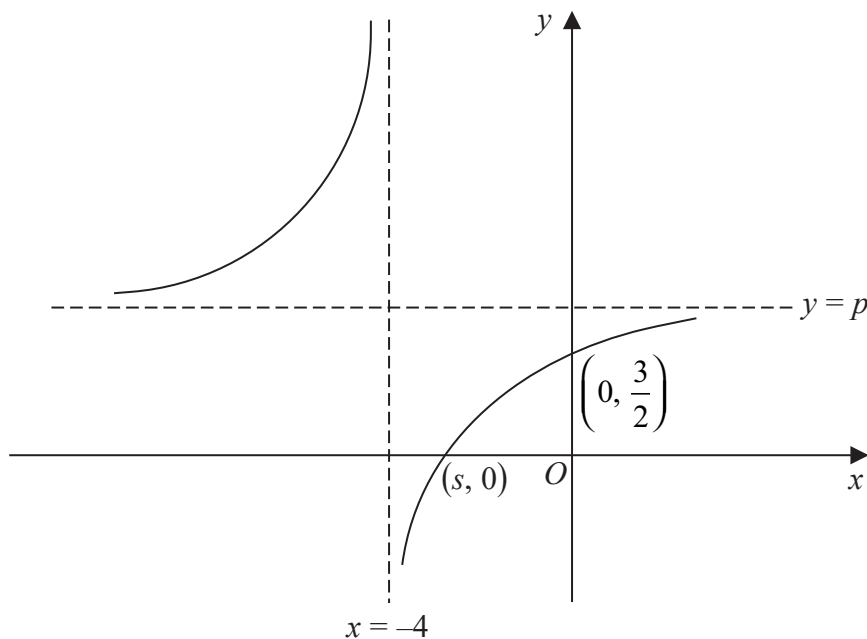


Diagram NOT accurately drawn

Figure 1

Figure 1 shows part of the curve  $C$  with equation

$$y = \frac{2x + q}{x + r} \quad x \neq -r$$

where  $q$  and  $r$  are integers.

The asymptote to  $C$  that is parallel to the  $y$ -axis has equation  $x = -4$

The asymptote to  $C$  that is parallel to the  $x$ -axis has equation  $y = p$

(a) Write down

(i) the value of  $p$

(ii) the value of  $r$

(2)

Given that  $C$  crosses the  $y$ -axis at the point with coordinates  $(0, \frac{3}{2})$

(b) find the value of  $q$

(2)

Given that  $C$  crosses the  $x$ -axis at the point with coordinates  $(s, 0)$

(c) find the value of  $s$

(2)

.....

.....

.....

.....



DO NOT WRITE IN THIS AREA

DO NOT WRITE IN THIS AREA

DO NOT WRITE IN THIS AREA

**Question 4 continued**

DO NOT WRITE IN THIS AREA

DO NOT WRITE IN THIS AREA

DO NOT WRITE IN THIS AREA

Area with horizontal dotted lines for writing answers.

**(Total for Question 4 is 6 marks)**



5 The line  $l$  with gradient  $-\frac{1}{12}$  passes through the points  $A$  and  $B$  with coordinates  $(p, 10)$  and  $(123, 0)$  respectively.

(a) Show that  $p = 3$

(2)

(b) Find an equation for  $l$  in the form  $rx + sy + t = 0$  where  $r, s$  and  $t$  are integers.

(2)

The line  $k$  is perpendicular to  $l$  and passes through the point  $A$ .

(c) Find an equation for  $k$  in the form  $y = mx + c$

(3)

Line  $k$  intersects the  $x$ -axis at the point  $C$ .

(d) Find the exact area of triangle  $ABC$ .

(4)

DO NOT WRITE IN THIS AREA

DO NOT WRITE IN THIS AREA

DO NOT WRITE IN THIS AREA



**Question 5 continued**

DO NOT WRITE IN THIS AREA

DO NOT WRITE IN THIS AREA

DO NOT WRITE IN THIS AREA

Area with horizontal dotted lines for writing.



**Question 5 continued**

Area with horizontal dotted lines for writing answers.

DO NOT WRITE IN THIS AREA

DO NOT WRITE IN THIS AREA

DO NOT WRITE IN THIS AREA



**Question 5 continued**

DO NOT WRITE IN THIS AREA

DO NOT WRITE IN THIS AREA

DO NOT WRITE IN THIS AREA

Area with horizontal dotted lines for writing.

**(Total for Question 5 is 11 marks)**





**Question 6 continued**

DO NOT WRITE IN THIS AREA

DO NOT WRITE IN THIS AREA

DO NOT WRITE IN THIS AREA

Area with horizontal dotted lines for writing.

**(Total for Question 6 is 6 marks)**





**Question 7 continued**

DO NOT WRITE IN THIS AREA

DO NOT WRITE IN THIS AREA

DO NOT WRITE IN THIS AREA

Area with horizontal dotted lines for writing.





**Question 7 continued**

DO NOT WRITE IN THIS AREA

DO NOT WRITE IN THIS AREA

DO NOT WRITE IN THIS AREA

Area with horizontal dotted lines for writing.

**(Total for Question 7 is 8 marks)**



8 The quadratic equation  $3x^2 - kx - 1 = 0$ , where  $k$  is a positive integer, has roots  $\alpha$  and  $\beta$

(a) Show that  $\alpha^2 + \beta^2 = \frac{k^2 + 6}{9}$  (3)

Given that  $\alpha^4 + \beta^4 = \frac{466}{81}$

(b) find the value of  $k$  (5)

(c) Hence form an equation, with integer coefficients, which has roots

$$\frac{\alpha^3 + \beta}{\beta} \text{ and } \frac{\beta^3 + \alpha}{\alpha}$$

(6)

DO NOT WRITE IN THIS AREA

DO NOT WRITE IN THIS AREA

DO NOT WRITE IN THIS AREA



**Question 8 continued**

DO NOT WRITE IN THIS AREA

DO NOT WRITE IN THIS AREA

DO NOT WRITE IN THIS AREA

Area with horizontal dotted lines for writing.





**Question 8 continued**

DO NOT WRITE IN THIS AREA

DO NOT WRITE IN THIS AREA

DO NOT WRITE IN THIS AREA

Area with horizontal dotted lines for writing answers.

**(Total for Question 8 is 14 marks)**





**Question 9 continued**

DO NOT WRITE IN THIS AREA

DO NOT WRITE IN THIS AREA

DO NOT WRITE IN THIS AREA

Area with horizontal dotted lines for writing.





**Question 9 continued**

DO NOT WRITE IN THIS AREA

DO NOT WRITE IN THIS AREA

DO NOT WRITE IN THIS AREA

Area with horizontal dotted lines for writing.

**(Total for Question 9 is 12 marks)**



10 (a) Show that  $\frac{9^{3y}}{243} = 3^{(6y-5)}$  (4)

(b) Solve the simultaneous equations

$$\frac{9^{3y}}{243} = 27^{(x-2)}$$

$$\log_{10} \sqrt{6xy} = \log_4 2$$
 (9)

DO NOT WRITE IN THIS AREA

DO NOT WRITE IN THIS AREA

DO NOT WRITE IN THIS AREA



**Question 10 continued**

DO NOT WRITE IN THIS AREA

DO NOT WRITE IN THIS AREA

DO NOT WRITE IN THIS AREA

Area with horizontal dotted lines for writing.





**Question 10 continued**

DO NOT WRITE IN THIS AREA

DO NOT WRITE IN THIS AREA

DO NOT WRITE IN THIS AREA

Area with horizontal dotted lines for writing.

**(Total for Question 10 is 13 marks)**



11

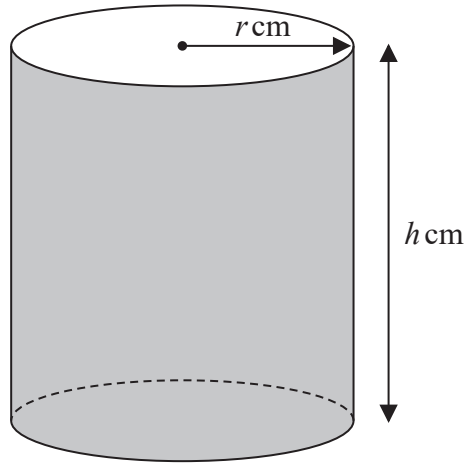
Diagram **NOT**  
accurately drawn

Figure 4

Figure 4 shows an open container in the shape of a cylinder with radius  $r$  cm and height  $h$  cm.

Given that the total surface area of the container is  $625\pi$  cm<sup>2</sup>

(a) show that

$$h = \frac{625 - r^2}{2r} \quad (3)$$

The volume of the container is  $V$  cm<sup>3</sup>

Given that  $r$  can vary,

(b) use calculus to find the value, to 3 significant figures, of  $r$  for which  $V$  is a maximum.

Justify that this value of  $r$  gives a maximum value of  $V$

(6)

(c) For the value of  $r$  found in part (b), find the corresponding value, to 3 significant figures, of  $h$

(1)

DO NOT WRITE IN THIS AREA

DO NOT WRITE IN THIS AREA

DO NOT WRITE IN THIS AREA



**Question 11 continued**

DO NOT WRITE IN THIS AREA

DO NOT WRITE IN THIS AREA

DO NOT WRITE IN THIS AREA

Area with horizontal dotted lines for writing.





**Question 11 continued**

DO NOT WRITE IN THIS AREA

DO NOT WRITE IN THIS AREA

DO NOT WRITE IN THIS AREA

Area with horizontal dotted lines for writing.



