


Please check the examination details below before entering your candidate information

Candidate surname					Other names			
Pearson Edexcel		Centre Number			Candidate Number			
International GCSE		<input type="text"/> <input type="text"/> <input type="text"/> <input type="text"/> <input type="text"/>			<input type="text"/> <input type="text"/> <input type="text"/> <input type="text"/> <input type="text"/>			
Tuesday 21 May 2019								
Morning (Time: 2 hours)					Paper Reference 4MA1/1HR			
Mathematics A								
Level 1/2								
Paper 1HR								
Higher Tier								
You must have: Ruler graduated in centimetres and millimetres, protractor, compasses, pen, HB pencil, eraser, calculator. Tracing paper may be used.								Total Marks

Instructions

- Use **black** ink or ball-point pen.
- **Fill in the boxes** at the top of this page with your name, centre number and candidate number.
- Answer **all** questions.
- Without sufficient working, correct answers may be awarded no marks.
- Answer the questions in the spaces provided
– *there may be more space than you need.*
- **Calculators may be used.**
- You must **NOT** write anything on the formulae page.
Anything you write on the formulae page will gain NO credit.

Information

- The total mark for this paper is 100.
- The marks for **each** question are shown in brackets
– *use this as a guide as to how much time to spend on each question.*

Advice

- Read each question carefully before you start to answer it.
- Check your answers if you have time at the end.

Turn over ►

P60260A

©2019 Pearson Education Ltd.

1/1/1




Pearson

International GCSE Mathematics

Formulae sheet – Higher Tier

Arithmetic series

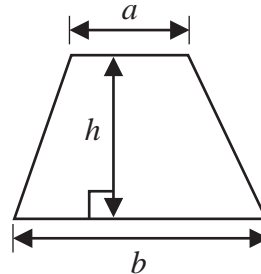
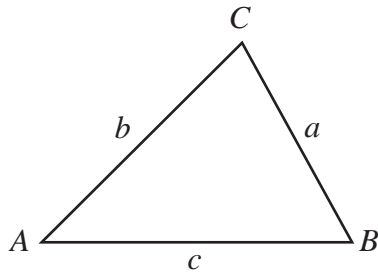
Sum to n terms, $S_n = \frac{n}{2} [2a + (n-1)d]$

The quadratic equation

The solutions of $ax^2 + bx + c = 0$ where $a \neq 0$ are given by:

$$x = \frac{-b \pm \sqrt{b^2 - 4ac}}{2a}$$

Area of trapezium = $\frac{1}{2}(a+b)h$

**Trigonometry**

In any triangle ABC

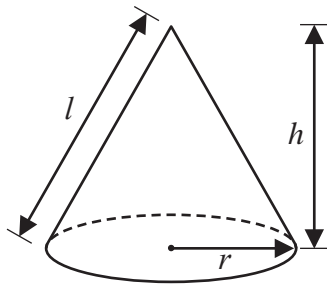
Sine Rule $\frac{a}{\sin A} = \frac{b}{\sin B} = \frac{c}{\sin C}$

Cosine Rule $a^2 = b^2 + c^2 - 2bc \cos A$

Area of triangle = $\frac{1}{2}ab \sin C$

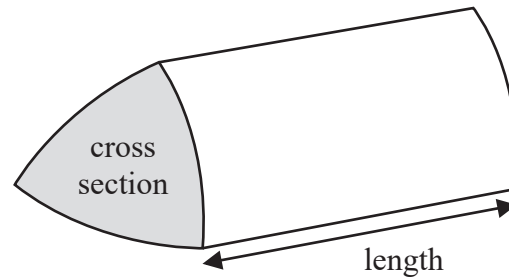
Volume of cone = $\frac{1}{3}\pi r^2 h$

Curved surface area of cone = $\pi r l$



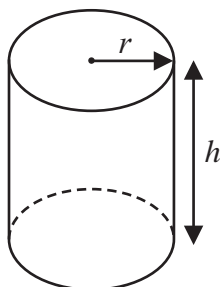
Volume of prism

= area of cross section \times length



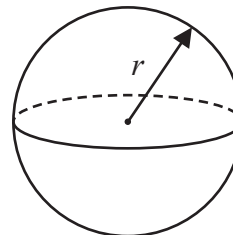
Volume of cylinder = $\pi r^2 h$

Curved surface area of cylinder = $2\pi r h$



Volume of sphere = $\frac{4}{3}\pi r^3$

Surface area of sphere = $4\pi r^2$



DO NOT WRITE IN THIS AREA

DO NOT WRITE IN THIS AREA

DO NOT WRITE IN THIS AREA



Answer ALL TWENTY FIVE questions.

Write your answers in the spaces provided.

You must write down all the stages in your working.

- 1 The diagram shows a cylinder.

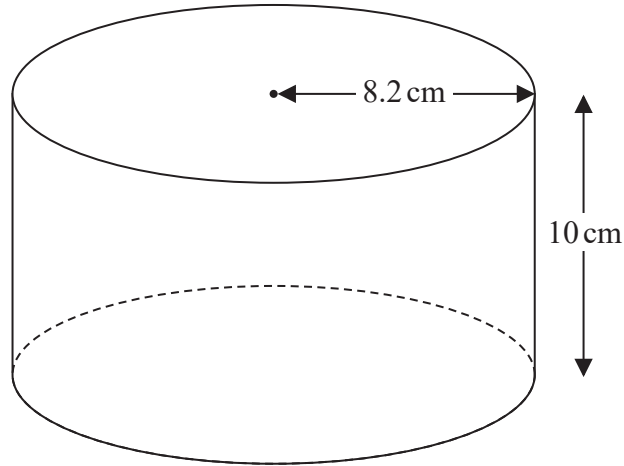


Diagram **NOT**
accurately drawn

The cylinder has radius 8.2 cm and height 10 cm.
The cylinder is empty.

Pam pours 1.5 litres of water into the cylinder.

Work out the depth of the water in the cylinder.
Give your answer correct to 1 decimal place.

.....cm

(Total for Question 1 is 3 marks)



2 Each interior angle of a regular polygon is 162°

Work out the number of sides the polygon has.

DO NOT WRITE IN THIS AREA

DO NOT WRITE IN THIS AREA

DO NOT WRITE IN THIS AREA

.....
(Total for Question 2 is 3 marks)



DO NOT WRITE IN THIS AREA

- 3 $\mathcal{E} = \{11, 12, 13, 14, 15, 16, 17, 18, 19, 20\}$
 $A = \{\text{even numbers}\}$
 $B = \{\text{multiples of 3}\}$

List the members of the set

(i) $A \cap B$

.....

(ii) $A \cup B$

.....

(iii) A'

.....

(Total for Question 3 is 3 marks)

- 4 Solve $4x - 13 = 17 + 8x$

$x = \dots\dots\dots$

(Total for Question 4 is 2 marks)

DO NOT WRITE IN THIS AREA

DO NOT WRITE IN THIS AREA



- 5 (a) Write 720 as a product of its prime factors.
Show your working clearly.

DO NOT WRITE IN THIS AREA

DO NOT WRITE IN THIS AREA

.....
(3)

- (b) Find the smallest whole number that 720 can be multiplied by to give a square number.

.....
(1)

(Total for Question 5 is 4 marks)

DO NOT WRITE IN THIS AREA



6 Lorenzo increases all the prices on his restaurant menu by 8%

Before the increase, the price of a dessert was \$4.25

(a) Work out the price of the dessert after the increase.

\$
(3)

After the increase, the price of lasagne is \$9.45

(b) Work out the price of lasagne before the increase.

\$
(3)

(Total for Question 6 is 6 marks)

DO NOT WRITE IN THIS AREA

DO NOT WRITE IN THIS AREA

DO NOT WRITE IN THIS AREA



- 7 The diagram shows isosceles triangle ABC .

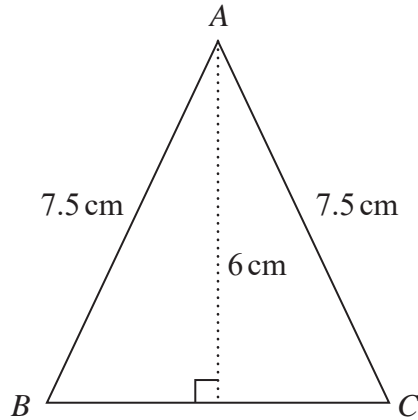


Diagram **NOT**
accurately drawn

$$AB = AC = 7.5 \text{ cm.}$$

The height of the triangle is 6 cm .

Calculate the area of the triangle.

..... cm^2

(Total for Question 7 is 4 marks)

DO NOT WRITE IN THIS AREA

DO NOT WRITE IN THIS AREA

DO NOT WRITE IN THIS AREA



DO NOT WRITE IN THIS AREA

DO NOT WRITE IN THIS AREA

DO NOT WRITE IN THIS AREA

- 8 There are 10 people in a lift.
These 10 people have a mean weight of 79.2 kg.

3 of these people get out of the lift.
These 3 people have a mean weight of 68 kg.

Work out the mean weight of the 7 people left in the lift.

.....kg

(Total for Question 8 is 3 marks)

- 9 (a) Simplify $t^9 \div t^3$

.....
(1)

- (b) Simplify $w^5 \times w^7$

.....
(1)

- (c) Simplify $(5xy^2)^3$

.....
(2)

(Total for Question 9 is 4 marks)



- 10 Change 22 metres per second to a speed in kilometres per hour.
Show your working clearly.

.....km/h

(Total for Question 10 is 3 marks)

- 11 3 years ago, the ratio of Tom's age to Clemmie's age was 2 : 7
Tom is now 15 years old and Clemmie is now x years old.

Find the value of x .

$x =$

(Total for Question 11 is 3 marks)

DO NOT WRITE IN THIS AREA

DO NOT WRITE IN THIS AREA

DO NOT WRITE IN THIS AREA



12

$$\text{pressure} = \frac{\text{force}}{\text{area}}$$

A box, in the shape of a cuboid, is going to be put on a table.

The whole of one face of the box will be in contact with the table.

The force exerted by the box on the table is always 105 newtons.

The box is 5 m by 4 m by 3 m.

The greatest pressure exerted by the box on the table is P newtons/m²

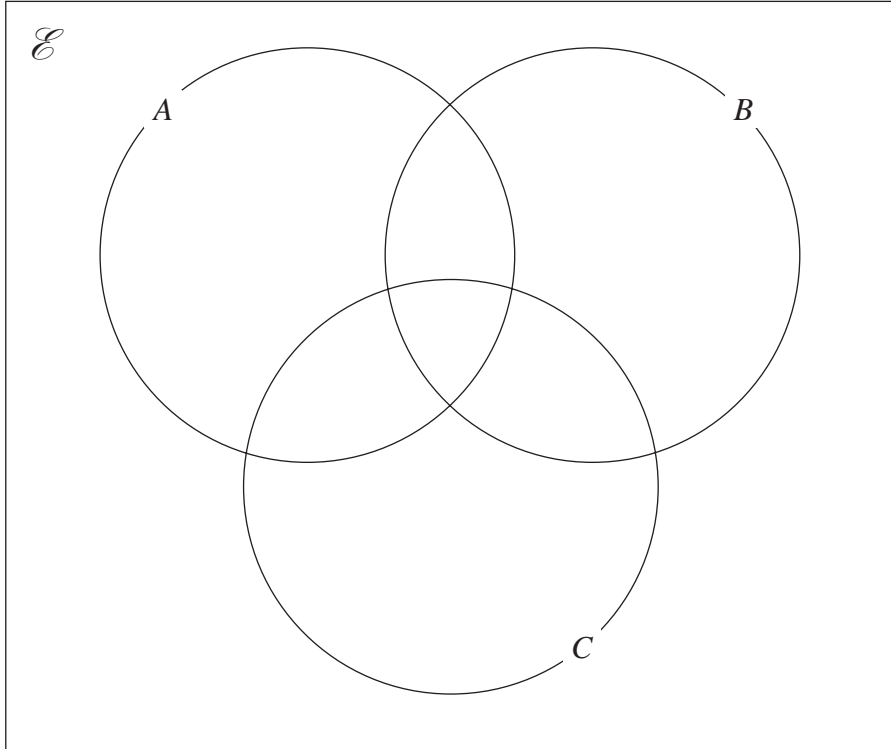
The least pressure exerted by the box on the table is Q newtons/m²

Work out the value of $P - Q$

.....
(Total for Question 12 is 3 marks)

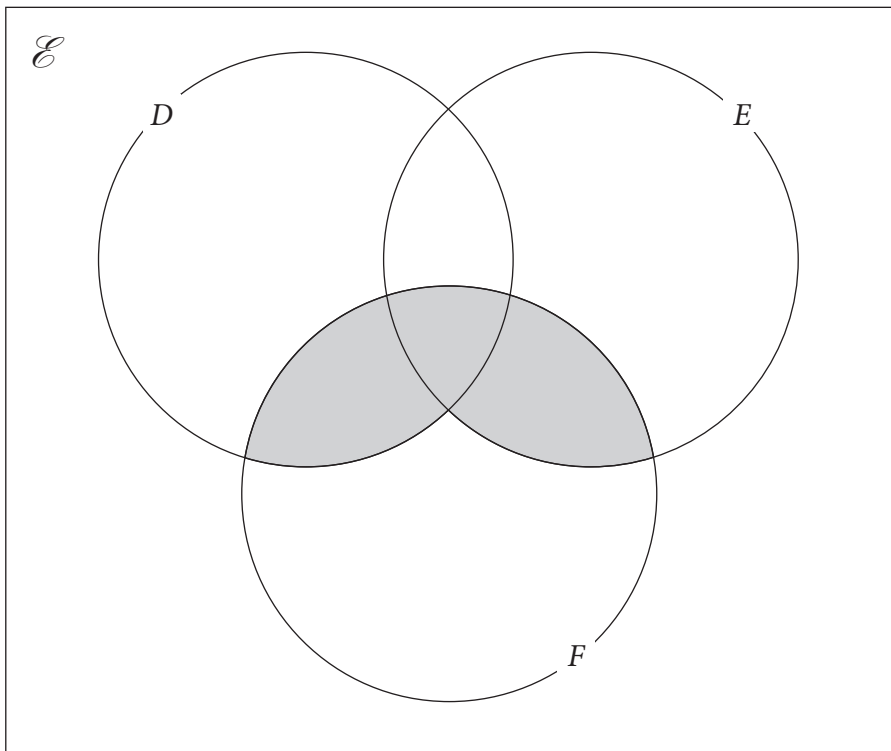


13 (a) On the Venn diagram, shade the set $(A \cup B)' \cap C$



(1)

(b) Use set notation to describe the shaded region in the Venn diagram below.



(1)

(Total for Question 13 is 2 marks)

DO NOT WRITE IN THIS AREA

DO NOT WRITE IN THIS AREA

DO NOT WRITE IN THIS AREA

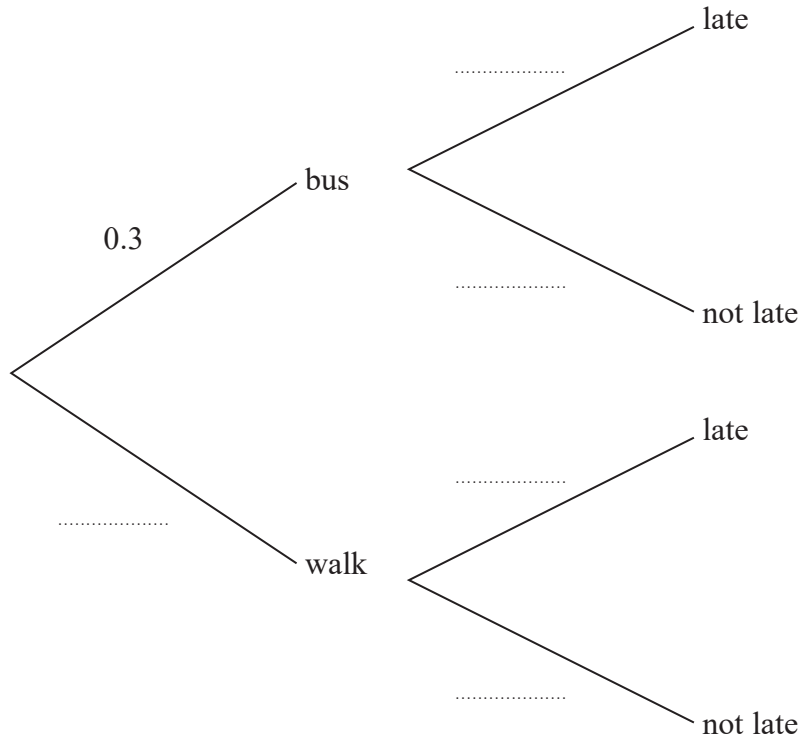


- 14 Each day that Barney goes to college, he either goes by bus or he walks.
The probability that Barney will go to college by bus on any day is 0.3

When Barney goes to college by bus, the probability that he will be late is 0.2

When Barney walks to college, the probability that he will be late is 0.1

- (a) Complete the probability tree diagram.



(2)

Barney will go to college on 200 days next year.

- (b) Work out an estimate for the number of days Barney will be late for college next year.

(4)

(Total for Question 14 is 6 marks)



15 The straight line L_1 has equation $2y = 6x - 5$

The straight line L_2 is perpendicular to L_1 and passes through the point $(9, -1)$

Find an equation for L_2

Give your answer in the form $ay + bx = c$

.....
(Total for Question 15 is 4 marks)

DO NOT WRITE IN THIS AREA

DO NOT WRITE IN THIS AREA

DO NOT WRITE IN THIS AREA



- 16 A particle P is moving along a straight line.
The fixed point O lies on this line.

At time t seconds, the displacement, s metres, of P from O is given by

$$s = 4t^3 - 6t^2 + 5t$$

At time t seconds, the velocity of P is v m/s.

- (a) Find an expression for v in terms of t .

$$v = \dots\dots\dots (2)$$

- (b) Find the time at which the acceleration of the particle is 6 m/s^2

$$\dots\dots\dots \text{seconds} (3)$$

(Total for Question 16 is 5 marks)

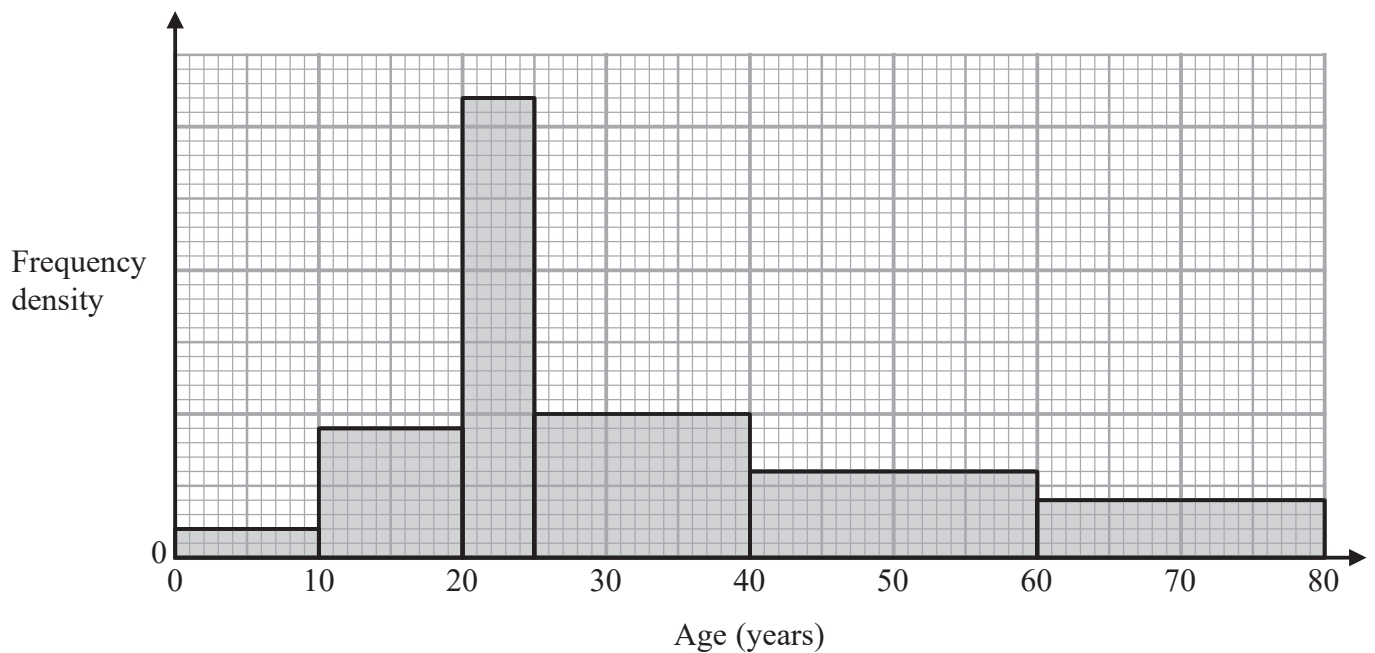
DO NOT WRITE IN THIS AREA

DO NOT WRITE IN THIS AREA

DO NOT WRITE IN THIS AREA



- 17 The histogram shows information about the ages of all the passengers travelling on a plane. No one on the plane is older than 80 years.



24 passengers on the plane are aged between 40 years and 60 years.

- (a) Work out the total number of passengers on the plane.

.....
(3)

A passenger on the plane is picked at random.

- (b) Work out an estimate for the probability that this person is older than 55 years.

.....
(2)

(Total for Question 17 is 5 marks)

DO NOT WRITE IN THIS AREA

DO NOT WRITE IN THIS AREA

DO NOT WRITE IN THIS AREA



- 18 (a) Expand and simplify $(x + 2)(2x + 3)(x - 7)$
Show your working clearly.

.....
(3)

- (b) Make m the subject of $p^2 = \frac{x + m}{2m - y}$

.....
(3)

(Total for Question 18 is 6 marks)

DO NOT WRITE IN THIS AREA

DO NOT WRITE IN THIS AREA

DO NOT WRITE IN THIS AREA



- 19** The 25th term of an arithmetic series is 44.5
The sum of the first 30 terms of this arithmetic series is 765
- Find the 16th term of the arithmetic series.
Show your working clearly.

DO NOT WRITE IN THIS AREA

DO NOT WRITE IN THIS AREA

DO NOT WRITE IN THIS AREA

.....

(Total for Question 19 is 5 marks)



20 $a = 25 \times 10^{14n}$ where n is an integer.

Find an expression, in terms of n , for $a^{\frac{3}{2}}$
Give your answer in standard form.

.....
(Total for Question 20 is 3 marks)



21 A curve has equation $y = f(x)$

There is only one maximum point on the curve.
The coordinates of this maximum point are $(4, 3)$

(a) Write down the coordinates of the maximum point on the curve with equation

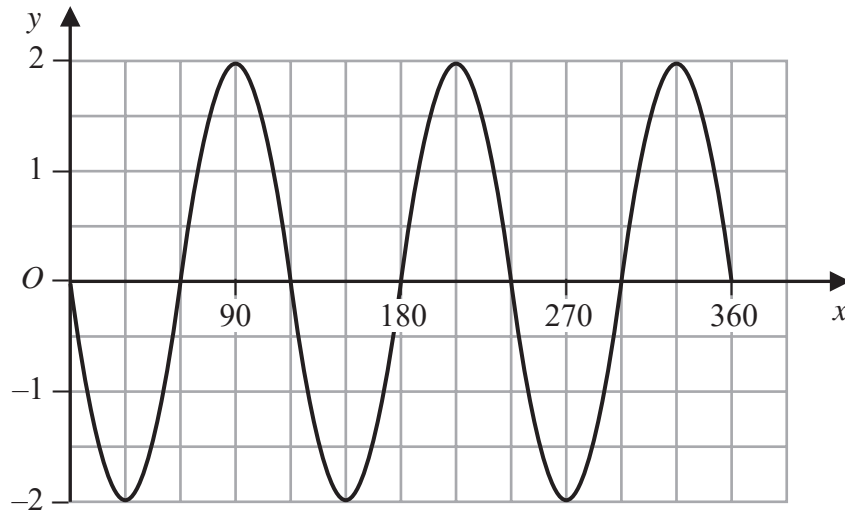
(i) $y = f(x - 5)$

(.....,) (1)

(ii) $y = 3f(x)$

(.....,) (2)

Here is the graph of $y = a \sin(bx)^\circ$ for $0 \leq x \leq 360$



(b) Find the value of a and the value of b .

$a =$

$b =$

(2)

(Total for Question 21 is 4 marks)



22 Solve the simultaneous equations

$$2x^2 + 3y^2 = 5$$

$$y = 2x + 1$$

Show clear algebraic working.

DO NOT WRITE IN THIS AREA

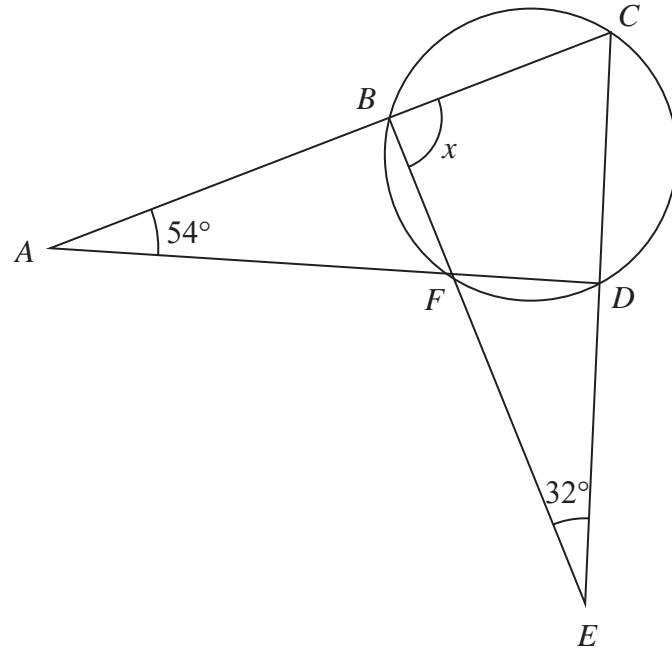
DO NOT WRITE IN THIS AREA

DO NOT WRITE IN THIS AREA

(Total for Question 22 is 5 marks)



23

Diagram **NOT**
accurately drawn

DO NOT WRITE IN THIS AREA

DO NOT WRITE IN THIS AREA

DO NOT WRITE IN THIS AREA

B , C , D and F are points on a circle.
 ABC , AFD , BFE and CDE are straight lines.

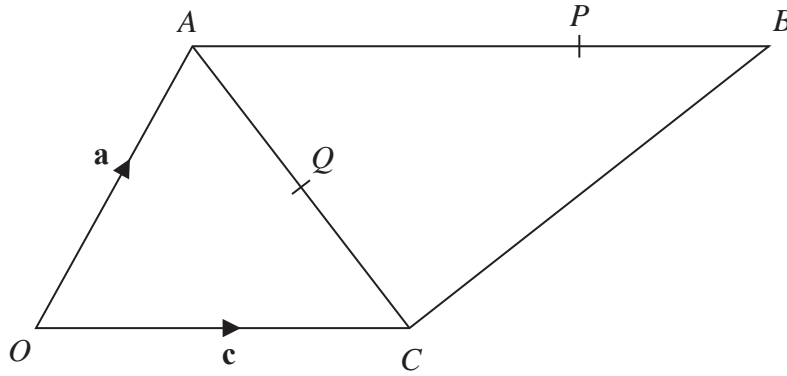
Work out the size of angle x .
 Show your working clearly.

 $x = \dots\dots\dots^\circ$

(Total for Question 23 is 4 marks)



24

Diagram **NOT**
accurately drawn

$$\vec{OA} = \mathbf{a} \quad \vec{OC} = \mathbf{c} \quad \vec{AB} = 2\mathbf{c}$$

P is the point on AB such that $AP : PB = 3 : 1$

Q is the point on AC such that OQP is a straight line.

Use a vector method to find $AQ : QC$

Show your working clearly.

$$AQ : QC = \dots\dots\dots$$

(Total for Question 24 is 5 marks)



25 A boat sails from point X to point Y and then to point Z .

Y is on a bearing of 280° from X .

Z is on a bearing of 220° from Y .

The distance from X to Y is 3.5 km.

The distance from Y to Z is 6 km.

Work out the bearing of Z from X .

Give your answer correct to 1 decimal place.

DO NOT WRITE IN THIS AREA

DO NOT WRITE IN THIS AREA

DO NOT WRITE IN THIS AREA

.....
(Total for Question 25 is 5 marks)

TOTAL FOR PAPER IS 100 MARKS

