


Please check the examination details below before entering your candidate information

Candidate surname					Other names			
Pearson Edexcel		Centre Number			Candidate Number			
International GCSE		<input type="text"/>	<input type="text"/>	<input type="text"/>	<input type="text"/>	<input type="text"/>	<input type="text"/>	<input type="text"/>
Tuesday 19 May 2020								
Morning (Time: 2 hours)					Paper Reference 4MA1/1F			
Mathematics A								
Paper 1F								
Foundation Tier								
You must have: Ruler graduated in centimetres and millimetres, protractor, pair of compasses, pen, HB pencil, eraser, calculator. Tracing paper may be used.								Total Marks

Instructions

- Use **black** ink or ball-point pen.
- **Fill in the boxes** at the top of this page with your name, centre number and candidate number.
- Answer **all** questions.
- Without sufficient working, correct answers may be awarded no marks.
- Answer the questions in the spaces provided
– *there may be more space than you need.*
- **Calculators may be used.**
- You must **NOT** write anything on the formulae page.
Anything you write on the formulae page will gain **NO** credit.

Information

- The total mark for this paper is 100.
- The marks for **each** question are shown in brackets
– *use this as a guide as to how much time to spend on each question.*

Advice

- Read each question carefully before you start to answer it.
- Check your answers if you have time at the end.

Turn over ►

P62650A

©2020 Pearson Education Ltd.

1/1/1

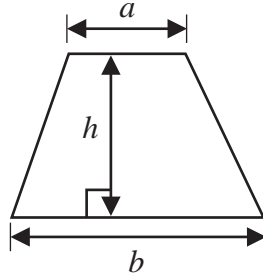


Pearson

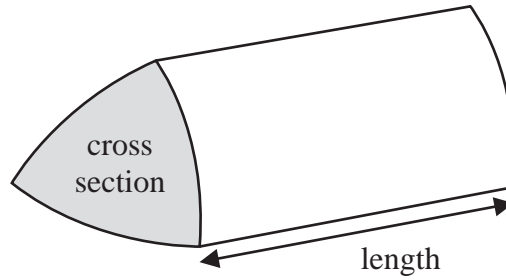
International GCSE Mathematics

Formulae sheet – Foundation Tier

$$\text{Area of trapezium} = \frac{1}{2}(a + b)h$$

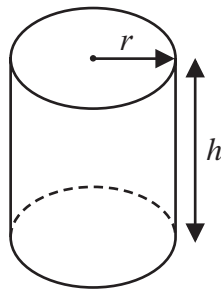


$$\text{Volume of prism} = \text{area of cross section} \times \text{length}$$



$$\text{Volume of cylinder} = \pi r^2 h$$

$$\text{Curved surface area of cylinder} = 2\pi r h$$



DO NOT WRITE IN THIS AREA

DO NOT WRITE IN THIS AREA

DO NOT WRITE IN THIS AREA



Answer ALL TWENTY THREE questions.

Write your answers in the spaces provided.

You must write down all the stages in your working.

- 1** The table gives information about the amount of crude oil, in barrels, produced per day by each of six countries in 2015

Country	Crude oil produced per day (number of barrels)
Australia	322 300
Congo	269 000
Gabon	213 300
South Sudan	220 000
Thailand	248 200
Vietnam	333 400

- (a) Write down the name of the country that produced the least number of barrels of crude oil.

.....
(1)

- (b) Work out the difference between the number of barrels of crude oil produced by Vietnam and the number of barrels of crude oil produced by Australia.

..... barrels
(1)

Thailand produced 248 200 barrels of crude oil.

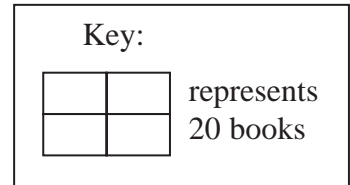
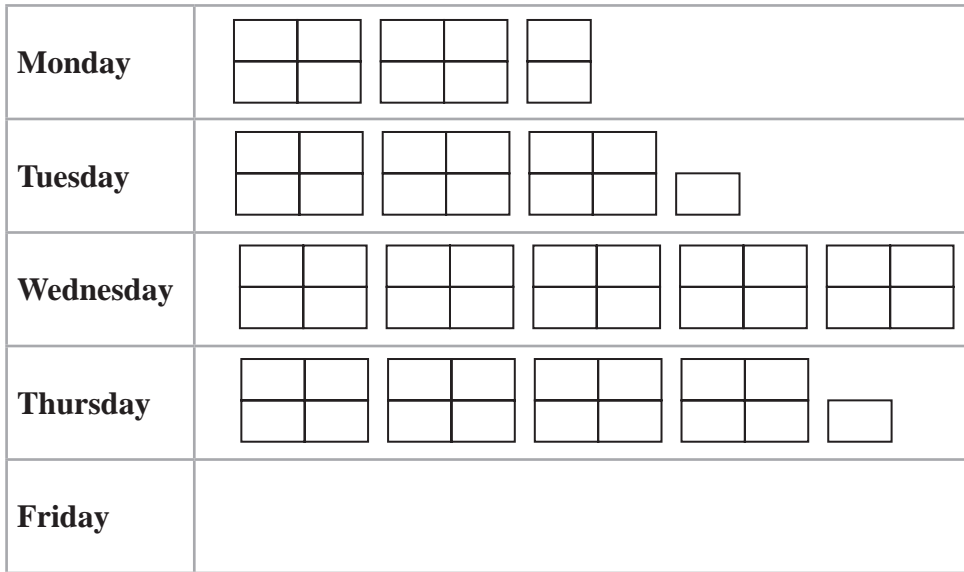
- (c) Write 248 200 correct to the nearest thousand.

.....
(1)

(Total for Question 1 is 3 marks)



- 2 The pictogram shows information about the number of books sold in a shop each day from Monday to Thursday last week.



DO NOT WRITE IN THIS AREA

DO NOT WRITE IN THIS AREA

DO NOT WRITE IN THIS AREA

- (a) How many books were sold on Wednesday last week?

.....
(1)

35 books were sold in the shop on Friday last week.

- (b) Show this information on the pictogram.

(1)

Last week

some books were sold in the shop on Saturday
no books were sold in the shop on Sunday
a total of 500 books were sold in the shop.

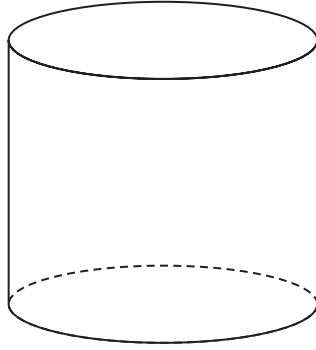
- (c) Work out the number of books that were sold in the shop on Saturday last week.

.....
(3)

(Total for Question 2 is 5 marks)



- 3 (a) Write down the mathematical name of this 3-D shape.



.....
(1)

Here is a solid cuboid.

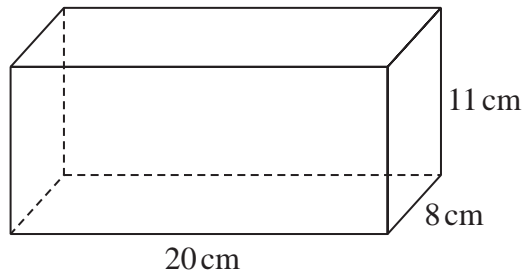


Diagram **NOT**
accurately drawn

- (b) (i) How many faces has the cuboid?

- (ii) How many vertices has the cuboid?

.....
(2)

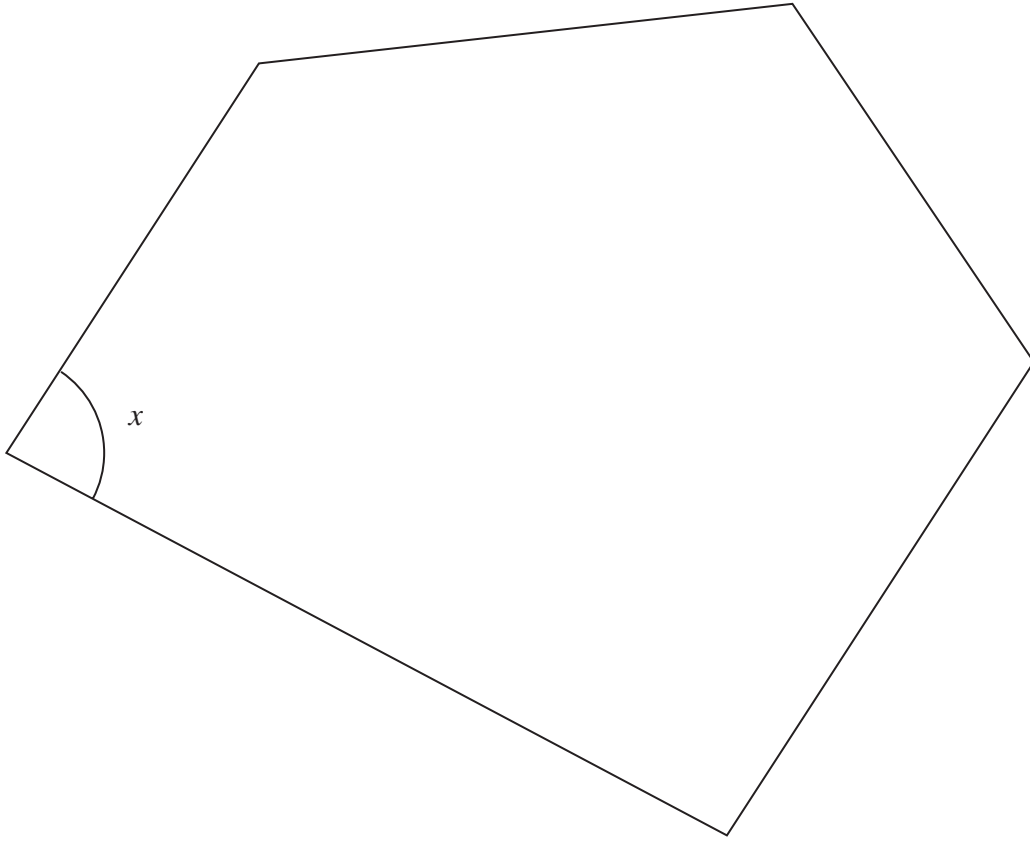
- (c) Work out the volume of the cuboid.

..... cm³
(2)

(Total for Question 3 is 5 marks)



4 Here is a polygon with five sides.



(a) Write down the mathematical name of a polygon with five sides.

.....
(1)

(b) Measure the size of the angle marked x .

.....
(1)

Two sides of the polygon are parallel.

(c) On the polygon, mark with arrows (\gg) this pair of parallel lines.

.....
(1)

DO NOT WRITE IN THIS AREA

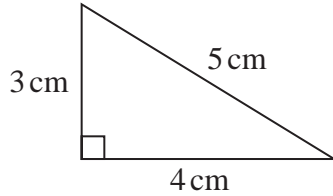
DO NOT WRITE IN THIS AREA

DO NOT WRITE IN THIS AREA

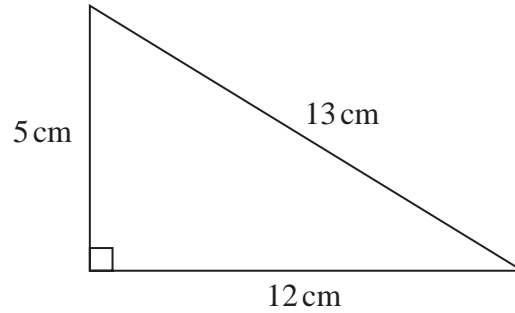


Here are two triangles.

Diagram **NOT**
accurately drawn



Triangle A



Triangle B

- (d) Are triangle **A** and triangle **B** similar triangles?
You must give a reason for your answer.

(1)

(Total for Question 4 is 4 marks)

- 5 Matt buys a notebook and some pencils.

The notebook costs \$2.35

Each pencil costs \$0.74

Matt has a total of \$20 to spend on the notebook and the pencils.

He buys the greatest number of pencils that he can.

Work out how many pencils he buys.

(Total for Question 5 is 3 marks)



- 6 (a) Write $\frac{24}{40}$ as a fraction in its simplest form.

.....
(2)

- (b) Write $\frac{1}{5}$ as a decimal.

.....
(1)

There are only blue bricks and white bricks in a box.

The ratio of the number of blue bricks to the number of white bricks is 3 : 7

- (c) What fraction of the bricks in the box are blue bricks?

.....
(1)

- (d) Show that $\frac{3}{8} + \frac{1}{24} = \frac{5}{12}$

.....
(2)

DO NOT WRITE IN THIS AREA

DO NOT WRITE IN THIS AREA

DO NOT WRITE IN THIS AREA



There are 280 counters in a bag.

$\frac{1}{2}$ of the counters are red.

$\frac{2}{5}$ of the counters are yellow.

The rest of the counters are green.

(e) Work out the number of green counters in the bag.

.....
(3)

(Total for Question 6 is 9 marks)



7 (a) Simplify $5c \times d$

.....
(1)

(b) Solve $x + 5 = 12$

$x =$
(1)

(c) Solve $9y = 36$

$y =$
(1)

(d) Simplify $8k + 5m - 2k + 6m$

.....
(2)

(e) Expand $4(3g + 1)$

.....
(1)

(Total for Question 7 is 6 marks)

DO NOT WRITE IN THIS AREA

DO NOT WRITE IN THIS AREA

DO NOT WRITE IN THIS AREA



- 8 Pavel asked 60 people at an airport where they came from.
All of the 60 people came from Europe or Africa or Asia.

9 people came from Africa.

14 females came from Europe.

3 males came from Africa.

16 of the 29 males came from Asia.

Using this information, complete the two-way table.

	Europe	Africa	Asia	Total
Male				
Female				
Total				

(Total for Question 8 is 4 marks)



9 $c = 4$
 $d = 7$

(a) Work out the value of $3c + 2d$

.....
(2)

$p = -6$
 $m = -2$

(b) Work out the value of $2p^2 + 3m$

.....
(2)

There are 6 eggs in a small box of eggs.
There are 12 eggs in a large box of eggs.

Alex buys g small boxes of eggs and h large boxes of eggs.
He buys a total of T eggs.

(c) Write down a formula for T in terms of g and h .

.....
(3)

(Total for Question 9 is 7 marks)

DO NOT WRITE IN THIS AREA

DO NOT WRITE IN THIS AREA

DO NOT WRITE IN THIS AREA



10 (a) Use your calculator to work out the value of $\frac{67.8 + 4.6^2}{\sqrt{56}}$

Write down all the figures on your calculator display.

.....
(2)

(b) Give your answer to part (a) correct to 2 significant figures.

.....
(1)

(Total for Question 10 is 3 marks)

DO NOT WRITE IN THIS AREA

DO NOT WRITE IN THIS AREA

DO NOT WRITE IN THIS AREA



11 A circle has radius 18 cm.

Work out the circumference of the circle.

Give your answer correct to 3 significant figures.

..... cm

(Total for Question 11 is 2 marks)

DO NOT WRITE IN THIS AREA

DO NOT WRITE IN THIS AREA

DO NOT WRITE IN THIS AREA



12 Gavin bought 3 pairs of jeans in the USA.
He paid a **total** of \$72

Gavin sold the 3 pairs of jeans in England.
He sold each pair of jeans for £34.50

$$£1 = \$1.34$$

Work out Gavin's percentage profit.
Give your answer correct to the nearest whole number.

DO NOT WRITE IN THIS AREA

DO NOT WRITE IN THIS AREA

DO NOT WRITE IN THIS AREA

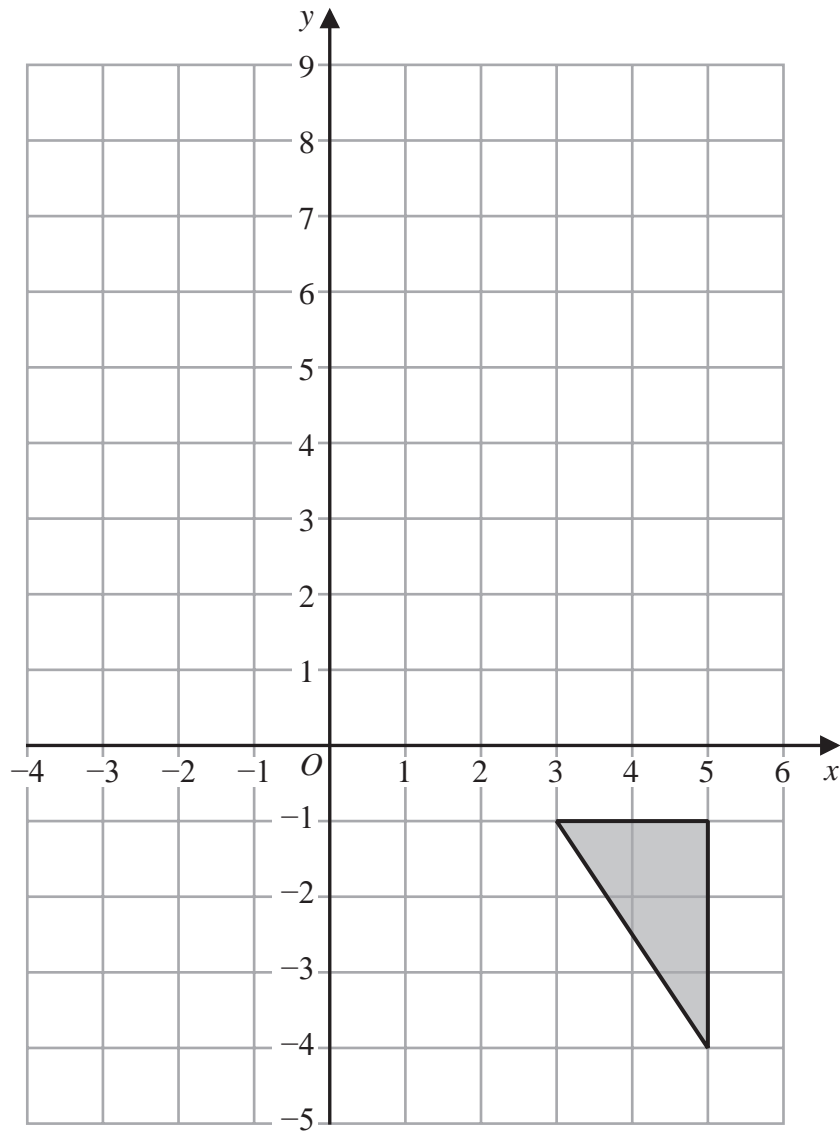
.....%

(Total for Question 12 is 4 marks)



P 6 2 6 5 0 A 0 1 5 2 8

13



(a) On the grid, reflect the shaded triangle in the line with equation $y = 2$

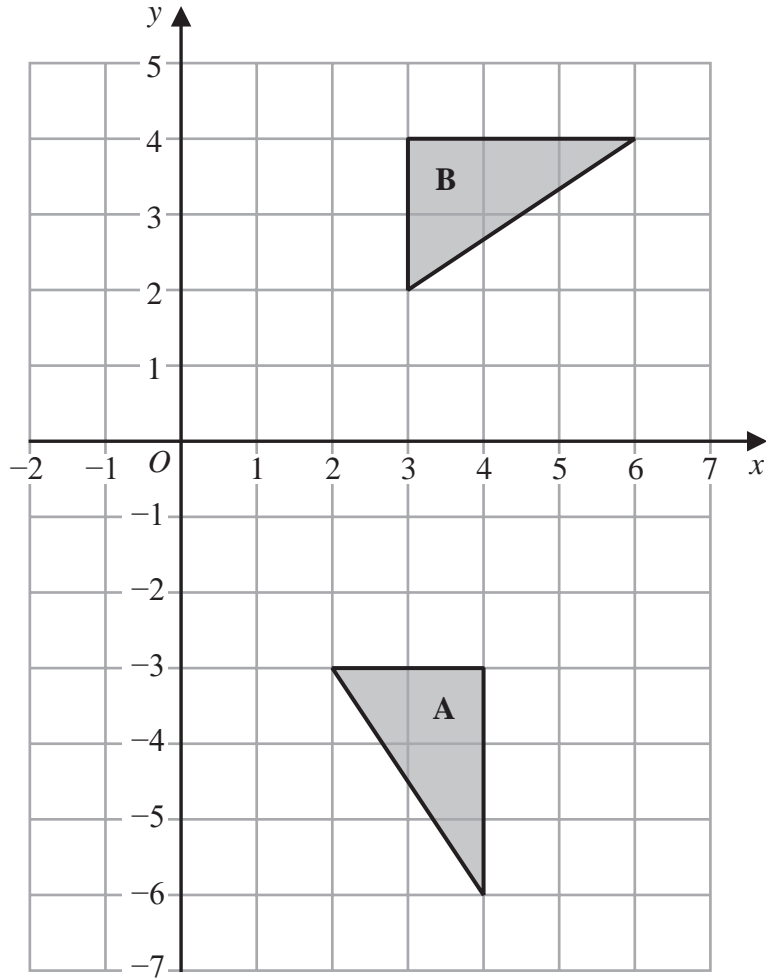
(2)

DO NOT WRITE IN THIS AREA

DO NOT WRITE IN THIS AREA

DO NOT WRITE IN THIS AREA





(b) Describe fully the single transformation that maps triangle **A** onto triangle **B**.

(3)

.....

.....

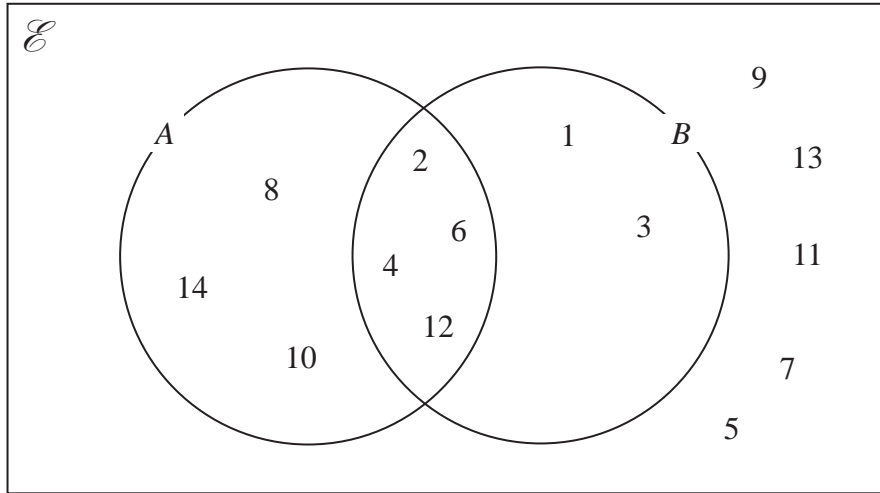
.....

(Total for Question 13 is 5 marks)

DO NOT WRITE IN THIS AREA



14 The numbers from 1 to 14 are shown in the Venn diagram.



(a) List the members of the set $A \cap B$

.....
(1)

(b) List the members of the set B'

.....
(1)

A number is picked at random from the numbers in the Venn diagram.

(c) Find the probability that this number is in set A but is **not** in set B.

.....
(2)

(Total for Question 14 is 4 marks)

DO NOT WRITE IN THIS AREA

DO NOT WRITE IN THIS AREA

DO NOT WRITE IN THIS AREA



- 15** Toy cars are made in a factory.
The toy cars are made for 15 hours each day.
5 toy cars are made every 12 seconds.

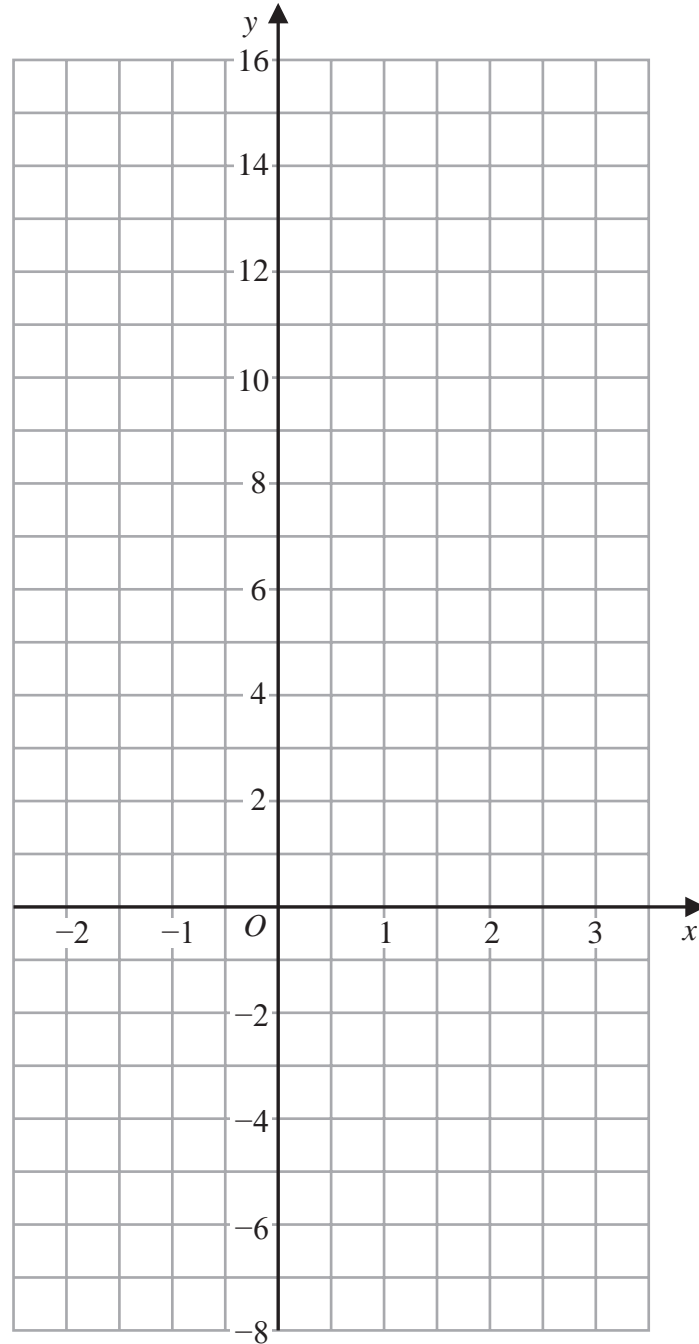
For the toy cars made each day, the probability of a toy car being faulty is 0.002

Work out an estimate of the number of faulty toy cars that are made each day.

.....
(Total for Question 15 is 4 marks)



16 On the grid, draw the graph of $y = 7 - 4x$ for values of x from -2 to 3



(Total for Question 16 is 3 marks)

DO NOT WRITE IN THIS AREA

DO NOT WRITE IN THIS AREA

DO NOT WRITE IN THIS AREA



17 Here is a list of six numbers written in order of size.

4 7 x 10 y y

The numbers have

a median of 9

a mean of 11

Find the value of x and the value of y .

$x = \dots\dots\dots$

$y = \dots\dots\dots$

(Total for Question 17 is 4 marks)

DO NOT WRITE IN THIS AREA

DO NOT WRITE IN THIS AREA

DO NOT WRITE IN THIS AREA



18 (a) Write 5.7×10^{-3} as an ordinary number.

.....
(1)

(b) Write 800 000 in standard form.

.....
(1)

(c) Work out $\frac{3 \times 10^5 - 2.7 \times 10^4}{6 \times 10^{-2}}$

.....
(2)

(Total for Question 18 is 4 marks)

19 A rocket travelled 100 km at an average speed of 28 440 km/h.

Work out how long it took the rocket to travel the 100 km.
Give your answer in seconds, correct to the nearest second.

..... seconds

(Total for Question 19 is 3 marks)

DO NOT WRITE IN THIS AREA

DO NOT WRITE IN THIS AREA

DO NOT WRITE IN THIS AREA



- 20 (a) Solve $5(4 - x) = 7 - 3x$
Show clear algebraic working.

$$x = \dots\dots\dots$$

(3)

- (b) Factorise fully $16m^3g^3 + 24m^2g^5$

$$\dots\dots\dots$$

(2)

- (c) (i) Factorise $y^2 - 2y - 48$

$$\dots\dots\dots$$

(2)

- (ii) Hence, solve $y^2 - 2y - 48 = 0$

$$\dots\dots\dots$$

(1)

(Total for Question 20 is 8 marks)

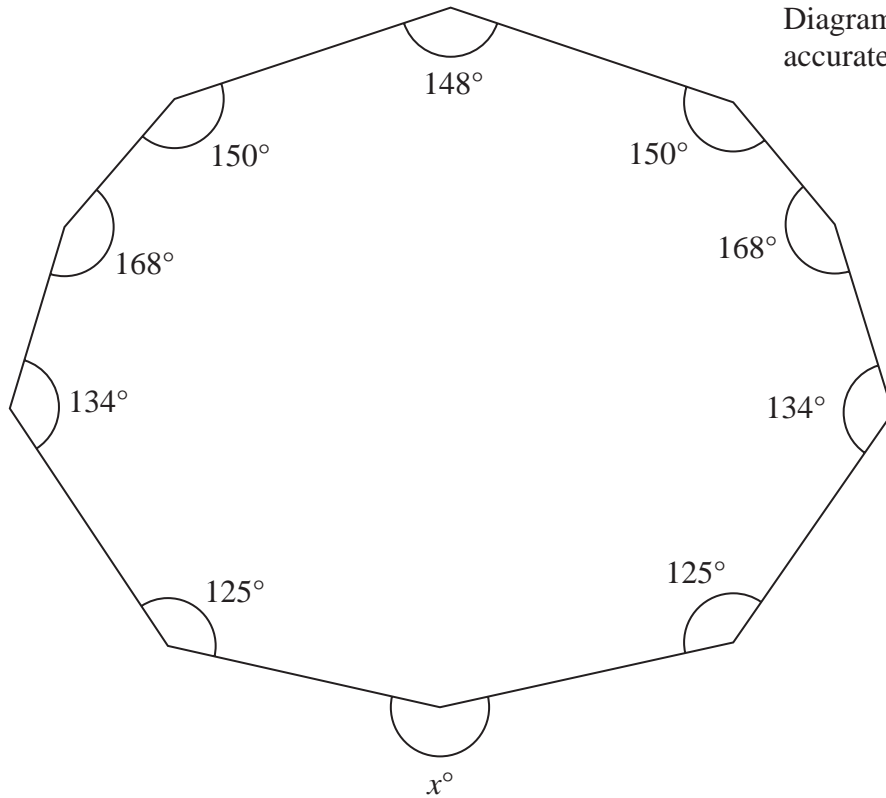
DO NOT WRITE IN THIS AREA

DO NOT WRITE IN THIS AREA

DO NOT WRITE IN THIS AREA



21 Here is a 10-sided polygon.



Work out the value of x .

$x = \dots\dots\dots$

(Total for Question 21 is 4 marks)

DO NOT WRITE IN THIS AREA

DO NOT WRITE IN THIS AREA

DO NOT WRITE IN THIS AREA



22 In a sale, normal prices are reduced by 20%

A bag costs 1080 rupees in the sale.

Work out the normal price of the bag.

..... rupees

(Total for Question 22 is 3 marks)

DO NOT WRITE IN THIS AREA

DO NOT WRITE IN THIS AREA

DO NOT WRITE IN THIS AREA



23 $A = 2 \times 3^{43}$
 $B = 16 \times 3^{37}$

(a) Find the highest common factor (HCF) of A and B .

.....
(1)

(b) Express the number $A \times B$ as a product of powers of its prime factors.
Give your answer in its simplest form.

.....
(2)

(Total for Question 23 is 3 marks)

TOTAL FOR PAPER IS 100 MARKS

DO NOT WRITE IN THIS AREA

DO NOT WRITE IN THIS AREA

DO NOT WRITE IN THIS AREA



DO NOT WRITE IN THIS AREA

DO NOT WRITE IN THIS AREA

DO NOT WRITE IN THIS AREA

BLANK PAGE



DO NOT WRITE IN THIS AREA

DO NOT WRITE IN THIS AREA

DO NOT WRITE IN THIS AREA

BLANK PAGE

