

Please check the examination details below before entering your candidate information


Candidate surname					Other names				
Centre Number				Candidate Number					

Pearson Edexcel International GCSE

Friday 8 November 2024

Morning (Time: 2 hours) **Paper reference** **4MA1/2H**

Mathematics A
PAPER 2H
Higher Tier



You must have: Ruler graduated in centimetres and millimetres, protractor, pair of compasses, pen, HB pencil, eraser, calculator. Tracing paper may be used.

Total Marks

Instructions

- Use **black** ink or ball-point pen.
- **Fill in the boxes** at the top of this page with your name, centre number and candidate number.
- Answer **all** questions.
- Without sufficient working, correct answers may be awarded no marks.
- Answer the questions in the spaces provided
– *there may be more space than you need.*
- **Calculators may be used.**
- You must **NOT** write anything on the formulae page.
- Anything you write on the formulae page will gain **NO** credit.

Information

- The total mark for this paper is 100.
- The marks for **each** question are shown in brackets
– *use this as a guide as to how much time to spend on each question.*

Advice

- Read each question carefully before you start to answer it.
- Check your answers if you have time at the end.

Turn over ►

P75936A

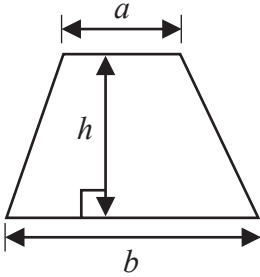
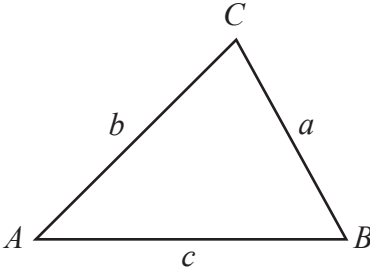
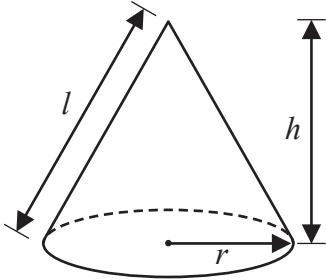
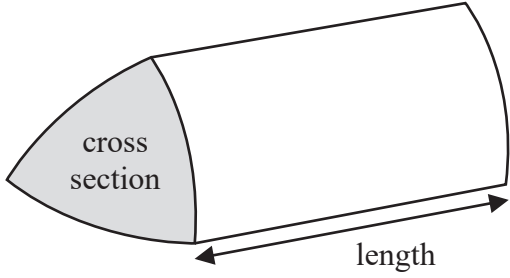
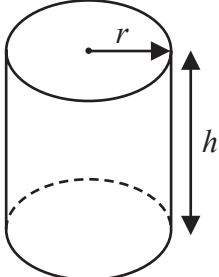
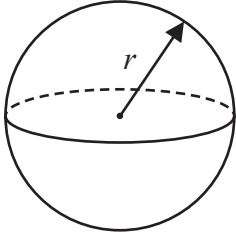
©2024 Pearson Education Ltd.
V:1/1/1/1/1/1/




Pearson

International GCSE Mathematics

Formulae sheet – Higher Tier

<p>Arithmetic series</p> <p>Sum to n terms, $S_n = \frac{n}{2} [2a + (n - 1)d]$</p>	<p>Area of trapezium = $\frac{1}{2}(a + b)h$</p>
<p>The quadratic equation</p> <p>The solutions of $ax^2 + bx + c = 0$ where $a \neq 0$ are given by:</p> $x = \frac{-b \pm \sqrt{b^2 - 4ac}}{2a}$	
<p>Trigonometry</p> 	<p>In any triangle ABC</p> <p>Sine Rule $\frac{a}{\sin A} = \frac{b}{\sin B} = \frac{c}{\sin C}$</p> <p>Cosine Rule $a^2 = b^2 + c^2 - 2bc \cos A$</p> <p>Area of triangle = $\frac{1}{2} ab \sin C$</p>
<p>Volume of cone = $\frac{1}{3} \pi r^2 h$</p> <p>Curved surface area of cone = $\pi r l$</p> 	<p>Volume of prism = area of cross section \times length</p> 
<p>Volume of cylinder = $\pi r^2 h$</p> <p>Curved surface area of cylinder = $2\pi r h$</p> 	<p>Volume of sphere = $\frac{4}{3} \pi r^3$</p> <p>Surface area of sphere = $4\pi r^2$</p> 

DO NOT WRITE IN THIS AREA

DO NOT WRITE IN THIS AREA

DO NOT WRITE IN THIS AREA



DO NOT WRITE IN THIS AREA

DO NOT WRITE IN THIS AREA

DO NOT WRITE IN THIS AREA

Answer ALL TWENTY FIVE questions.

Write your answers in the spaces provided.

You must write down all the stages in your working.

1 Show that $1\frac{5}{7} \times 2\frac{3}{16} = 3\frac{3}{4}$

(Total for Question 1 is 3 marks)

2 The length of a table is measured as 1.4 metres correct to one decimal place.

(a) Write down the upper bound of the length of the table.

..... metres
(1)

(b) Write down the lower bound of the length of the table.

..... metres
(1)

(Total for Question 2 is 2 marks)



3 The diagram shows triangle PQR

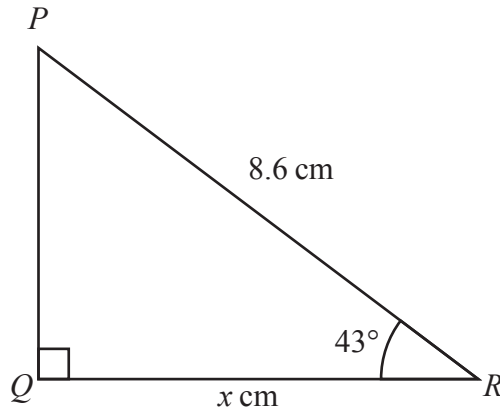


Diagram **NOT** accurately drawn

Work out the value of x
Give your answer correct to one decimal place.

$x = \dots\dots\dots$

(Total for Question 3 is 3 marks)

DO NOT WRITE IN THIS AREA

DO NOT WRITE IN THIS AREA

DO NOT WRITE IN THIS AREA



DO NOT WRITE IN THIS AREA

4 N is a number.
17% of N is 357

(a) Work out the value of N

$$N = \dots\dots\dots (2)$$

In 2019, the population of a village was 650
In 2020, the population of the village was 806

(b) Work out the percentage increase in the population.

$$\dots\dots\dots \% (3)$$

(Total for Question 4 is 5 marks)



5 Cody has a biased 5-sided spinner, numbered 1, 2, 3, 4, 5

The table gives the probabilities that when the spinner is spun it will land on 2 or on 3 or on 5

Number	1	2	3	4	5
Probability		0.14	0.17		0.21

The probability that the spinner will land on 1 is the same as the probability that the spinner will land on 4

Cody is going to spin the spinner 400 times.

Work out an estimate for the number of times the spinner will land on 4

DO NOT WRITE IN THIS AREA

DO NOT WRITE IN THIS AREA

DO NOT WRITE IN THIS AREA

.....
(Total for Question 5 is 4 marks)

DO NOT WRITE IN THIS AREA

DO NOT WRITE IN THIS AREA

DO NOT WRITE IN THIS AREA

6 The diagram shows a solid triangular prism.

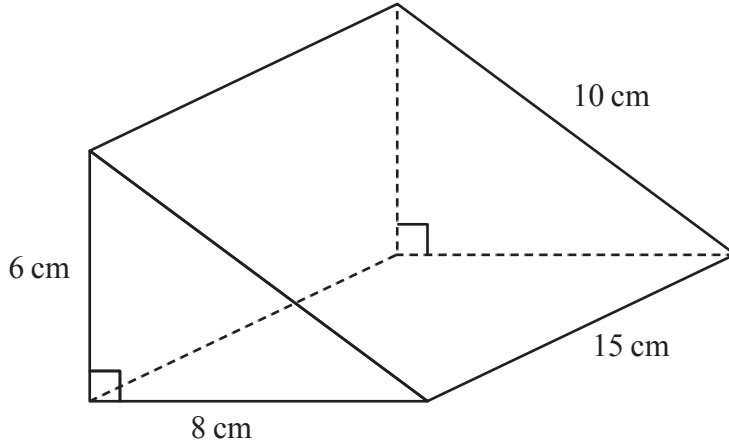


Diagram **NOT** accurately drawn

Work out the **total** surface area of the triangular prism.

..... cm²

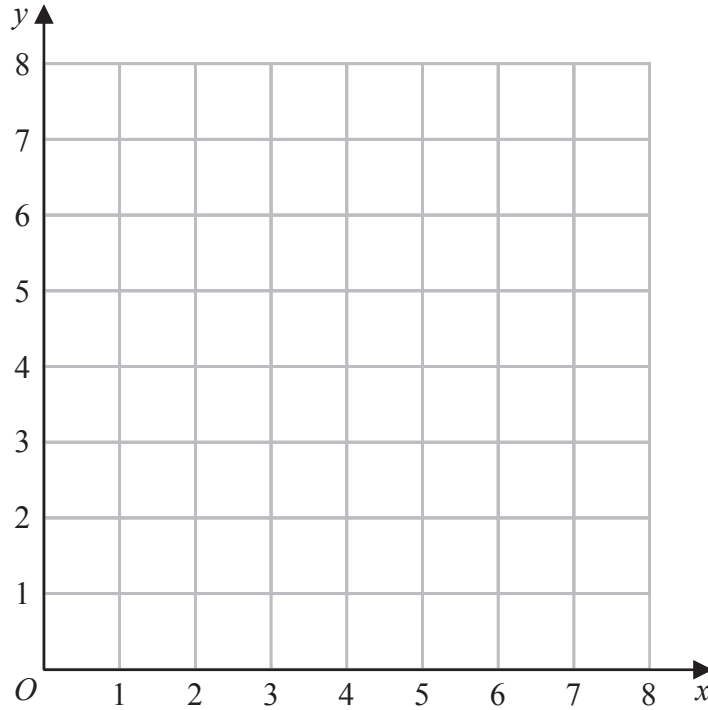
(Total for Question 6 is 3 marks)



7 (a) On the grid, draw the straight line with equation

- (i) $x = 3$ (ii) $y = 1$ (iii) $x + y = 7$

Label each line with its equation.



(3)

(b) Show, by shading on the grid, the region that satisfies all three of the inequalities

$$x \geq 3 \quad y \geq 1 \quad x + y \leq 7$$

Label the region **R**

(1)

(Total for Question 7 is 4 marks)

DO NOT WRITE IN THIS AREA

DO NOT WRITE IN THIS AREA

DO NOT WRITE IN THIS AREA



DO NOT WRITE IN THIS AREA

DO NOT WRITE IN THIS AREA

DO NOT WRITE IN THIS AREA

- 8 Kim puts 4 bananas in a bag.
The mean weight of the 4 bananas in the bag is 145 grams.

Andy puts one more banana into the bag.
The mean weight of the 5 bananas in the bag is 142 grams.

Work out the weight of the banana that Andy puts into the bag.

..... grams

(Total for Question 8 is 3 marks)

- 9 Nisha invests 20 000 euros for 3 years in a savings account.
She gets 3.5% per year compound interest.

Work out how much money Nisha will have in her savings account
at the end of the 3 years.

Give your answer correct to the nearest euro.

..... euros

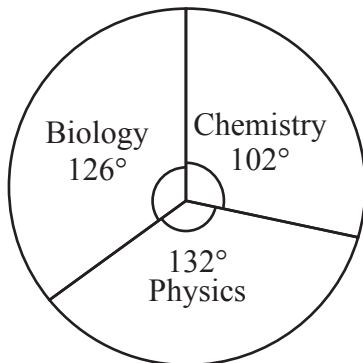
(Total for Question 9 is 3 marks)



- 10 All the students in year 10 and all the students in year 11 named their favourite science subject from Biology, Chemistry and Physics.

The pie chart shows information about the results for the year 10 students.

The table shows information about the results for the year 11 students.



Pie chart for year 10

science subject	number of students
Biology	$3x + 6$
Chemistry	$5x + 8$
Physics	$7x - 9$

Table for year 11

There are 300 students in year 10

There are 320 students in year 11

More students in year 10 than in year 11 said Biology was their favourite science subject.

How many more?

DO NOT WRITE IN THIS AREA

DO NOT WRITE IN THIS AREA

DO NOT WRITE IN THIS AREA

DO NOT WRITE IN THIS AREA

DO NOT WRITE IN THIS AREA

DO NOT WRITE IN THIS AREA

.....
(Total for Question 10 is 5 marks)



11

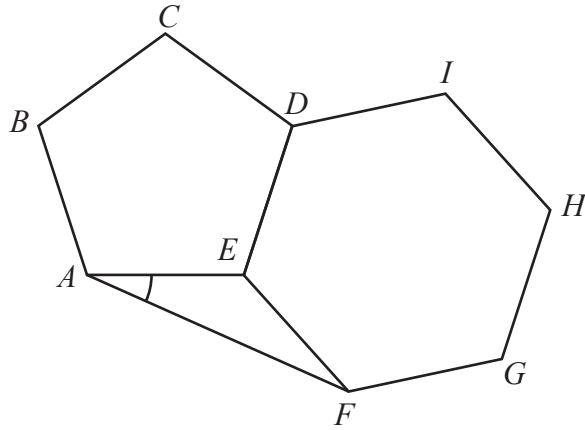


Diagram **NOT** accurately drawn

ABCDE is a regular pentagon.
DEFGHI is a regular hexagon.

AF is a straight line.

Work out the size of angle *EAF*

DO NOT WRITE IN THIS AREA

DO NOT WRITE IN THIS AREA

DO NOT WRITE IN THIS AREA

(Total for Question 11 is 5 marks)



12 (a) Solve $\frac{3x+2}{5} - \frac{2x+1}{3} = x$

Show clear algebraic working.

$x = \dots\dots\dots$
(3)

(b) Make c the subject of the formula $f = \sqrt{\frac{a+bc}{c-d}}$

$\dots\dots\dots$
(4)

(Total for Question 12 is 7 marks)



13 The frequency table gives information about the weights, in kilograms, of 60 parcels in a delivery van.

Weight (w kilograms)	Frequency
$0 < w \leq 1$	4
$1 < w \leq 2$	15
$2 < w \leq 3$	20
$3 < w \leq 4$	11
$4 < w \leq 5$	6
$5 < w \leq 6$	4

(a) Complete the cumulative frequency table.

Weight (w kilograms)	Cumulative frequency
$0 < w \leq 1$	
$0 < w \leq 2$	
$0 < w \leq 3$	
$0 < w \leq 4$	
$0 < w \leq 5$	
$0 < w \leq 6$	

(1)

(b) On the grid opposite, draw a cumulative frequency graph for your table.

(2)

DO NOT WRITE IN THIS AREA

DO NOT WRITE IN THIS AREA

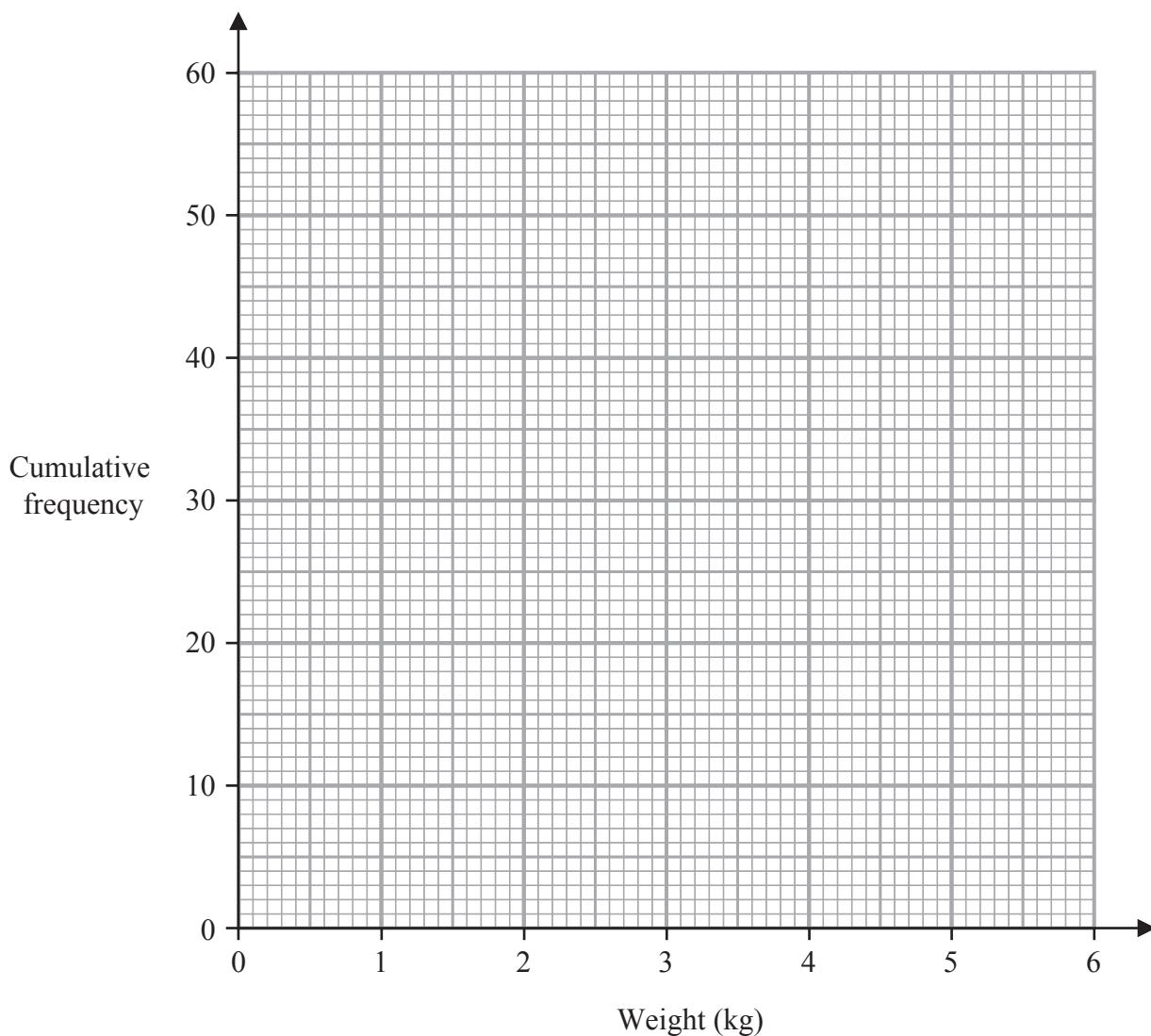
DO NOT WRITE IN THIS AREA



DO NOT WRITE IN THIS AREA

DO NOT WRITE IN THIS AREA

DO NOT WRITE IN THIS AREA



(c) Use your graph to find an estimate for the median weight of the 60 parcels.

..... kilograms
(1)

(d) Use your graph to find an estimate for the number of these parcels that weigh more than 3.7 kilograms.

.....
(2)

(Total for Question 13 is 6 marks)



14 Given that $\frac{3^{2n+3}}{3^4} = 3^3 \times 3^{1-2n}$

find the value of n
Show your working clearly.

$$n = \dots\dots\dots$$

(Total for Question 14 is 3 marks)

15 Use algebra to show that $0.7\ddot{6}\ddot{3} = \frac{42}{55}$

(Total for Question 15 is 2 marks)

DO NOT WRITE IN THIS AREA

DO NOT WRITE IN THIS AREA

DO NOT WRITE IN THIS AREA



16 A, B, C and D are points on a circle, centre O

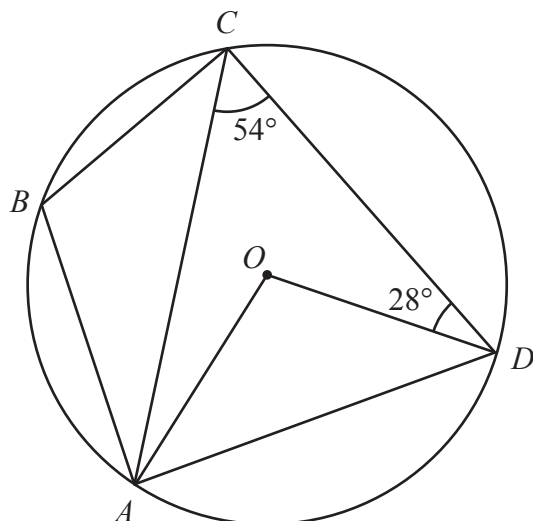


Diagram **NOT** accurately drawn

(a) (i) Work out the size of angle AOD

.....
(1)

(ii) Give a reason for your answer to part (a)(i)

.....
.....
(1)

(b) Work out the size of angle CAO

.....
(1)

(c) Work out the size of angle ABC

.....
(2)

(Total for Question 16 is 5 marks)

DO NOT WRITE IN THIS AREA

DO NOT WRITE IN THIS AREA

DO NOT WRITE IN THIS AREA



17 Here are two vectors.

$$\vec{FG} = \begin{pmatrix} -5 \\ 2 \end{pmatrix} \quad \vec{HG} = \begin{pmatrix} 4 \\ 14 \end{pmatrix}$$

Calculate the magnitude of the vector \vec{HF}

DO NOT WRITE IN THIS AREA

DO NOT WRITE IN THIS AREA

DO NOT WRITE IN THIS AREA

(Total for Question 17 is 3 marks)



- 18 The straight line **L** is perpendicular to the straight line with equation $2x + y = 9$ and passes through the point with coordinates $(8, 11)$

Find an equation for **L**

Give your answer in the form $y = mx + c$

DO NOT WRITE IN THIS AREA

DO NOT WRITE IN THIS AREA

DO NOT WRITE IN THIS AREA

(Total for Question 18 is 4 marks)



19 A curve has equation $y = f(x)$

There is only one minimum point on the curve.
The coordinates of this minimum point are (5, 4)

Write down the coordinates of the minimum point on the curve with equation

(i) $y = f(x + 5)$

(.....,)
(1)

(ii) $y = 3f(x)$

(.....,)
(1)

(iii) $y = f(x) - 7$

(.....,)
(1)

(Total for Question 19 is 3 marks)

20 Solve the inequality $10x^2 + 11x - 21 < 0$
Show clear algebraic working.

.....
(Total for Question 20 is 3 marks)

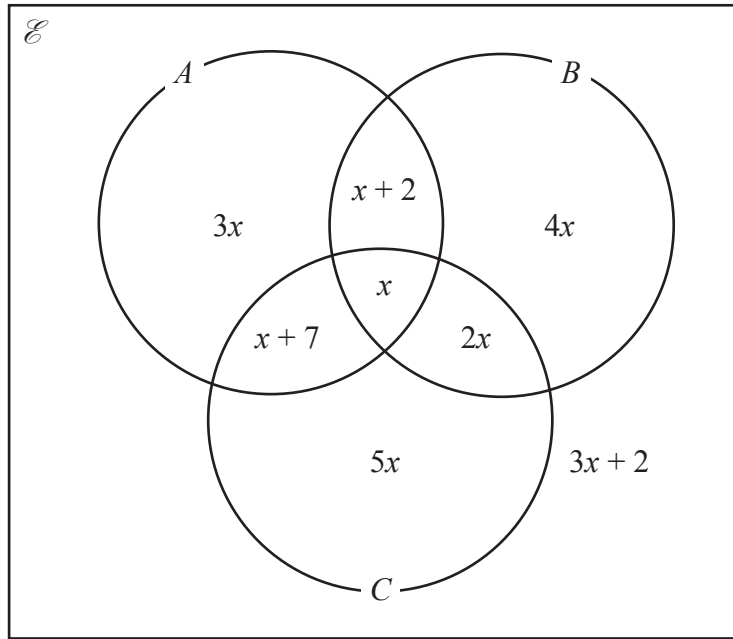


DO NOT WRITE IN THIS AREA

DO NOT WRITE IN THIS AREA

DO NOT WRITE IN THIS AREA

21 The Venn diagram shows information about the numbers of items in set A , set B and set C , where x is an integer.



Given that $n(A \cup B)' = 26$

find $n(A' \cap C)$

$n(A' \cap C) = \dots\dots\dots$

(Total for Question 21 is 4 marks)



22 Solve the simultaneous equations

$$x^2 + y^2 + y = 3$$

$$x + 2 = y$$

Show clear algebraic working.

DO NOT WRITE IN THIS AREA

DO NOT WRITE IN THIS AREA

DO NOT WRITE IN THIS AREA

.....
(Total for Question 22 is 5 marks)



23 Show that $\frac{16x^2 - 36}{x - 7} \div \frac{2x^2 + 7x + 6}{x^2 - 5x - 14} - (7 + 8x) = n$

where n is an integer to be found.
Show clear algebraic working.

DO NOT WRITE IN THIS AREA

DO NOT WRITE IN THIS AREA

DO NOT WRITE IN THIS AREA

(Total for Question 23 is 4 marks)



24 A , B and C are three points on horizontal ground.

$$AB = 8.4 \text{ metres } BC = 9.2 \text{ metres}$$

B is on a bearing of 067° from A

C is on a bearing of 129° from B

Calculate the bearing of A from C

Give your answer correct to the nearest degree.

DO NOT WRITE IN THIS AREA

DO NOT WRITE IN THIS AREA

DO NOT WRITE IN THIS AREA



DO NOT WRITE IN THIS AREA

DO NOT WRITE IN THIS AREA

DO NOT WRITE IN THIS AREA

o

(Total for Question 24 is 6 marks)

Turn over for Question 25



25 The diagram shows an equilateral triangle ABC and a circle with centre O

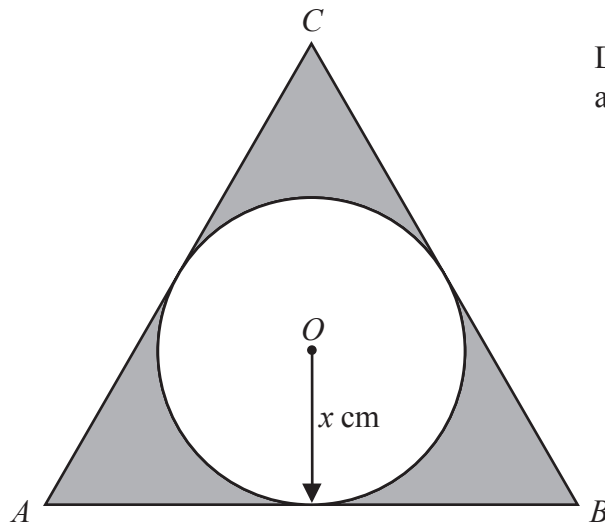


Diagram **NOT**
accurately drawn

DO NOT WRITE IN THIS AREA

DO NOT WRITE IN THIS AREA

DO NOT WRITE IN THIS AREA

AB , BC and CA are tangents to the circle.

The radius of the circle is x cm

The total area, in cm^2 , of the regions shown shaded in the diagram is nx^2

Find the value of n

Give your answer correct to 3 significant figures.



DO NOT WRITE IN THIS AREA

DO NOT WRITE IN THIS AREA

DO NOT WRITE IN THIS AREA

$$n = \dots\dots\dots$$

(Total for Question 25 is 5 marks)

TOTAL FOR PAPER IS 100 MARKS



DO NOT WRITE IN THIS AREA

DO NOT WRITE IN THIS AREA

DO NOT WRITE IN THIS AREA

BLANK PAGE

